


Answer Key for PCCF Recruitment Exam 31st July to 11th Aug 2023 for Objection Handling purpose only

Participant ID	ACC0000000000000
Participant Name	WWW.MPSCMATERIAL.COM
Test Center Name	
Test Date	31/07/2023
Test Time	4:30 PM - 6:30 PM
Subject	Accountant
Candidate Registered Photo	
Candidate Exam Day Photo	

Section : Marathi Language

Q.1 विश्वकप जिंकल्याने भारतीय संघात चैतन्य _____.

- Ans
- 1. हलले
 - 2. बहरले
 - 3. संचारले
 - 4. हादरले

Question Type : MCQ

Question ID : 630680287877

Option 1 ID : 6306801119418

Option 2 ID : 6306801119417

Option 3 ID : 6306801119415

Option 4 ID : 6306801119416

Status : Answered

Chosen Option : 3

Q.2 'ऋतुचक्र' हे ललित लेखन कोणाचे आहे?

- Ans
- ✓ 1. दुर्गा भागवत
 - ✗ 2. सरोजिनी बाबर
 - ✗ 3. शिरीष पै
 - ✗ 4. इरावती कर्वे

Question Type : MCQ
Question ID : 630680287898
Option 1 ID : 6306801119500
Option 2 ID : 6306801119499
Option 3 ID : 6306801119502
Option 4 ID : 6306801119501
Status : Answered
Chosen Option : 3

Q.3 खालीलपैकी कोणते वाक्य व्याकरण नियमांनुसार चुकीचे नाही?

- Ans
- ✗ 1. प्रस्थापनेचा महात्मा फुले यांचे धोरण, तत्त्वज्ञान आणि त्यांचा समग्र कार्यक्रम हा लोकशाही सच्चा मार्ग आहे.
 - ✗ 2. धोरण, तत्त्वज्ञान आणि त्यांचा समग्र कार्यक्रम हा लोकशाही प्रस्थापनेचा सच्चा मार्ग आहे महात्मा फुले यांचे
 - ✗ 3. समग्र कार्यक्रम महात्मा फुले यांचे धोरण, तत्त्वज्ञान आणि त्यांचा हा लोकशाही प्रस्थापनेचा सच्चा मार्ग आहे.
 - ✓ 4. महात्मा फुले यांचे धोरण, तत्त्वज्ञान आणि त्यांचा समग्र कार्यक्रम हा लोकशाही प्रस्थापनेचा सच्चा मार्ग आहे.

Question Type : MCQ
Question ID : 630680287879
Option 1 ID : 6306801119424
Option 2 ID : 6306801119423
Option 3 ID : 6306801119425
Option 4 ID : 6306801119426
Status : Answered
Chosen Option : 4

Q.4 'राधिका केर काढते.' - प्रयोग ओळखा.

Ans ✓ 1. सकर्मक कर्तरी

✗ 2. शक्य कर्मणी प्रयोग

✗ 3. भावे प्रयोग

✗ 4. अकर्मक कर्तरी

Question Type : MCQ

Question ID : 630680287882

Option 1 ID : 6306801119438

Option 2 ID : 6306801119437

Option 3 ID : 6306801119436

Option 4 ID : 6306801119435

Status : Answered

Chosen Option : 1

Q.5 अर्थ सांगा.

'सुनील'

Ans ✓ 1. उत्तम प्रकारचा निळा रंग

✗ 2. उत्तम प्रकारचा जांभळा रंग

✗ 3. निळा

✗ 4. उत्तम रंग

Question Type : MCQ

Question ID : 630680287881

Option 1 ID : 6306801119433

Option 2 ID : 6306801119434

Option 3 ID : 6306801119431

Option 4 ID : 6306801119432

Status : Answered

Chosen Option : 4

Q.6 समूहदर्शक शब्दांच्या जोड्या लावा.

'अ' गट	'ब' गट
a. उंटांचा	i. पुडके
b. नोटांचे	ii. तांडा
c. गुरांचा	iii. घड
d. द्राक्षांचा	iv. कळप
	v. ढीग

- Ans
- ✓ 1. a-ii, b-i, c-iv, d-iii
 - ✗ 2. a-ii, b-i, c-iv, d-v
 - ✗ 3. a-i, b-iii, c-v, d-ii
 - ✗ 4. a-iv, b-iii, c-v, d-ii

Question Type : MCQ
Question ID : 630680287901
Option 1 ID : 6306801119513
Option 2 ID : 6306801119511
Option 3 ID : 6306801119512
Option 4 ID : 6306801119514
Status : Answered
Chosen Option : 1

Q.7 'अंग मोडून काम करणे' - वाक्यात उपयोग करा.

- Ans
- ✗ 1. सगळ्यांचे कल्याण व्हावे म्हणून अंग मोडले पाहिजे.
 - ✗ 2. अभ्यास करताना अर्णवचे अंग मोडले.
 - ✓ 3. बांधकाम मजूर अंग मोडून काम करतात.
 - ✗ 4. अंग मोडल्याने नानाला आनंद झाला.

Question Type : MCQ
Question ID : 630680287893
Option 1 ID : 6306801119480
Option 2 ID : 6306801119481
Option 3 ID : 6306801119479
Option 4 ID : 6306801119482
Status : Answered
Chosen Option : 3

Q.8 वाक्प्रचार व त्यांचे अर्थ यांच्या अचूक जोड्या जुळवा.

'अ' गट	'ब' गट
a. ओहोटी लागणे	i. धाक दाखविणे
b. कानामागे टाकणे	ii. लयास जाणे
c. चंचुप्रवेश होणे	iii. दुर्लक्ष करणे
d. जरब बसविणे	iv. शिरकाव होणे
	v. पाणी कमी होणे

- Ans
- ✗ 1. a-v, b-ii, c-iv, d-i
 - ✗ 2. a-i, b-ii, c-iv, d-iii
 - ✗ 3. a-v, b-iii, c-iv, d-i
 - ✓ 4. a-ii, b-iii, c-iv, d-i

Question Type : MCQ
Question ID : 630680287900
Option 1 ID : 6306801119508
Option 2 ID : 6306801119509
Option 3 ID : 6306801119507
Option 4 ID : 6306801119510
Status : Answered
Chosen Option : 4

Q.9 'कामापुरता मामा'- या म्हणीसाठी समानार्थी म्हण शोधा.

- Ans
- ✗ 1. चहापेक्षा किटली गरम
 - ✗ 2. दह्यापुरते रामायण
 - ✗ 3. गुरू तसा चेला
 - ✓ 4. ताकापुरती आजीबाई

Question Type : MCQ
Question ID : 630680287892
Option 1 ID : 6306801119477
Option 2 ID : 6306801119476
Option 3 ID : 6306801119478
Option 4 ID : 6306801119475
Status : Answered
Chosen Option : 4

Q.10 खालीलपैकी कोणत्या साहित्यिकाला ज्ञानपीठ पुरस्कार मिळाला आहे?

- Ans
- ✓ 1. वि. स. खांडेकर
 - ✗ 2. राजन गवस
 - ✗ 3. नीरजा
 - ✗ 4. अरुणा ढेरे

Question Type : MCQ

Question ID : 630680287899

Option 1 ID : 6306801119503

Option 2 ID : 6306801119504

Option 3 ID : 6306801119506

Option 4 ID : 6306801119505

Status : Answered

Chosen Option : 1

Q.11 'महात्मा फुले यांनी गुलामगिरीविरुद्ध संघर्ष केला.' -

'गुलामगिरी' या शब्दाचा अर्थ खालीलपैकी कोणता नाही?

- Ans
- ✗ 1. पारतंत्र्य
 - ✗ 2. परवशता
 - ✗ 3. दास्य
 - ✓ 4. शोषित

Question Type : MCQ

Question ID : 630680287896

Option 1 ID : 6306801119494

Option 2 ID : 6306801119493

Option 3 ID : 6306801119492

Option 4 ID : 6306801119491

Status : Answered

Chosen Option : 2

Q.12 'न हे नयन, पाकळ्या उमलल्या सरोजातिल ।

न हे वदन, चंद्रमा शरदिचा गमे केवळ ॥' - या काव्यपंक्तीच्या संदर्भात खालीलपैकी कोणते विधान चुकीचे आहे?

- Ans
- ✗ 1. पहिल्या पंक्तीत कवीला डोळ्याचे वर्णन करावयाचे आहे.
 - ✗ 2. कवी डोळ्यांची तुलना कमळाच्या पाकळ्याशी करतो.
 - ✗ 3. यात 'कमळातील पाकळ्या' हे उपमान आहे.
 - ✓ 4. या उदाहरणात 'नयन' हे उपमान आहे.

Question Type : MCQ

Question ID : 630680287891

Option 1 ID : 6306801119471

Option 2 ID : 6306801119472

Option 3 ID : 6306801119474

Option 4 ID : 6306801119473

Status : Answered

Chosen Option : 4

Q.13 समानार्थी शब्द ओळखा.

'अचल'

- Ans
- ✗ 1. विचल
 - ✗ 2. अमर्याद
 - ✗ 3. अवास्तव
 - ✓ 4. स्थिर

Question Type : MCQ

Question ID : 630680287884

Option 1 ID : 6306801119443

Option 2 ID : 6306801119444

Option 3 ID : 6306801119446

Option 4 ID : 6306801119445

Status : Answered

Chosen Option : 4

Q.14 'समुद्रमंथनातून निघालेले विष प्यायल्याने शंकराचा कंठ निळा झाला.' - अधोरेखित शब्दाचा अर्थ काय आहे?

- Ans
- 1. कर
 - 2. डोळा
 - 3. गळा
 - 4. कान

Question Type : MCQ

Question ID : 630680287880

Option 1 ID : 6306801119430

Option 2 ID : 6306801119427

Option 3 ID : 6306801119428

Option 4 ID : 6306801119429

Status : Answered

Chosen Option : 3

Q.15 'महात्मा फुले हे आधुनिक महात्मातील मूलभूत अशा समाजपरिवर्तनाच्या चळवळीचे आद्यप्रवर्तक होते.' अधोरेखित शब्दाचा अर्थ ओळखा.

- Ans
- 1. पुरोगामी
 - 2. नाविन्य
 - 3. प्रतिगामी
 - 4. अर्वाचीन

Question Type : MCQ

Question ID : 630680287895

Option 1 ID : 6306801119487

Option 2 ID : 6306801119490

Option 3 ID : 6306801119489

Option 4 ID : 6306801119488

Status : Answered

Chosen Option : 4

Q.16 'बहीण' शब्दाचा समानार्थी शब्द सांगा.

- Ans
- 1. विप्र
 - 2. भ्राता
 - 3. वधू
 - 4. भगिनी

Question Type : MCQ

Question ID : 630680287885

Option 1 ID : 6306801119449

Option 2 ID : 6306801119447

Option 3 ID : 6306801119448

Option 4 ID : 6306801119450

Status : Answered

Chosen Option : 4

Q.17 '(मध्यप्रदेश) नेपानगर येथे (वाघ) गुराख्यावर हल्ला केला.' - कंसातील शब्दाचे योग्य रूप वापरून वाक्य बनवा.

Ans 1.

मध्यप्रदेशातील नेपानगर येथे वाघाशी गुराख्यावर हल्ला केला.

2.

मध्यप्रदेशातील नेपानगर येथे वाघाने गुराख्यावर हल्ला केला.

3. मध्यप्रदेशातील नेपानगर येथे वाघाने गुराख्या हल्ला केला.

4. मध्यप्रदेशाने नेपानगर येथे वाघाने गुराख्यावर हल्ला केला.

Question Type : MCQ

Question ID : 630680287878

Option 1 ID : 6306801119422

Option 2 ID : 6306801119420

Option 3 ID : 6306801119419

Option 4 ID : 6306801119421

Status : Answered

Chosen Option : 2

Q.18 'अटकाव' शब्दाचा विरुद्धार्थी शब्द ओळखा.

Ans 1. मोकळीक

2. अडवणूक

3. अपाय

4. अपात्र

Question Type : MCQ

Question ID : 630680287888

Option 1 ID : 6306801119460

Option 2 ID : 6306801119459

Option 3 ID : 6306801119462

Option 4 ID : 6306801119461

Status : Answered

Chosen Option : 1

Q.19 खालीलपैकी कोणता पर्याय चुकीचा आहे?

- Ans
- ✗ 1. सेवकांकडून प्रसाद वाटण्यात आला - नवीन कर्मणी प्रयोग
 - ✓ 2. मला आज मळमळते - प्रधानकर्तृक कर्मणी प्रयोग
 - ✗ 3. त्याला आंबा खावतो - शक्य कर्मणी प्रयोग
 - ✗ 4. त्याचे वृत्तपत्र वाचून झाले - समापन कर्मणी प्रयोग

Question Type : MCQ

Question ID : 630680287883

Option 1 ID : 6306801119442

Option 2 ID : 6306801119440

Option 3 ID : 6306801119439

Option 4 ID : 6306801119441

Status : Answered

Chosen Option : 2

Q.20 खालीलपैकी कोणता 'कर' शब्दाचा समानार्थी शब्द नाही?

- Ans
- ✗ 1. किरण
 - ✗ 2. हात
 - ✓ 3. कर्म
 - ✗ 4. जकात

Question Type : MCQ

Question ID : 630680287886

Option 1 ID : 6306801119452

Option 2 ID : 6306801119453

Option 3 ID : 6306801119451

Option 4 ID : 6306801119454

Status : Answered

Chosen Option : 3

Q.21 सामान्य कार्यकर्ता असलेले जयंतराव महापौर झाले खरे, पण पक्षश्रेष्ठींच्या कटू बोलण्याने _____ अशी त्यांची अवस्था झाली.

- Ans
- ✗ 1. अळीमिळी गुपचिळी
 - ✗ 2. अचाट खाणे, मसणात जाणे
 - ✓ 3. अपमानाची पोळी, सर्वांग जाळी
 - ✗ 4. अति तेथे माती

Question Type : MCQ
Question ID : 630680287894
Option 1 ID : 6306801119483
Option 2 ID : 6306801119485
Option 3 ID : 6306801119486
Option 4 ID : 6306801119484
Status : Answered
Chosen Option : 1

Q.22 'सावळाच रंग तुझा पावसाळी नभापरी !' - अलंकार ओळखा.

- Ans
- ✗ 1. दृष्टान्त
 - ✗ 2. अपन्हुती
 - ✗ 3. उत्प्रेक्षा
 - ✓ 4. उपमा

Question Type : MCQ
Question ID : 630680287889
Option 1 ID : 6306801119466
Option 2 ID : 6306801119465
Option 3 ID : 6306801119464
Option 4 ID : 6306801119463
Status : Answered
Chosen Option : 4

Q.23 अलंकारासंदर्भात खालीलपैकी कोणते विधान चुकीचे आहे?

Ans ✘ 1.

अनन्वय अलंकारात उपमेयाला उपमेयाचीच उपमा दिली जाते.

✘ 2.

उपमेमध्ये सादृश्य दाखविताना जेवी, सम, सारखा हे शब्द वापरतात.

✘ 3.

दृष्टान्त अलंकारात सादृश्य असते, पण ते दाखविणारे साम्यवाचक शब्द नसतात.

✔ 4.

रूपक अलंकारात उपमेय व उपमान यांत भेद दाखवलेला असतो.

Question Type : MCQ

Question ID : 630680287890

Option 1 ID : 6306801119469

Option 2 ID : 6306801119467

Option 3 ID : 6306801119468

Option 4 ID : 6306801119470

Status : Answered

Chosen Option : 4

Q.24 'दासबोध' ही कोणाची रचना आहे?

Ans ✔ 1. संत रामदास

✘ 2. संत तुकाराम

✘ 3. संत ज्ञानेश्वर

✘ 4. संत एकनाथ

Question Type : MCQ

Question ID : 630680287897

Option 1 ID : 6306801119497

Option 2 ID : 6306801119495

Option 3 ID : 6306801119496

Option 4 ID : 6306801119498

Status : Answered

Chosen Option : 1

Q.25 विरुद्धार्थी शब्द ओळखा.

'ओले'

- Ans
- 1. उणा
 - 2. भिजके
 - 3. सुके
 - 4. अओले

Question Type : MCQ
Question ID : 630680287887
Option 1 ID : 6306801119458
Option 2 ID : 6306801119455
Option 3 ID : 6306801119457
Option 4 ID : 6306801119456
Status : Answered
Chosen Option : 3

Section : English Language

Q.1 Select the most appropriate option to fill in the blank.

The train will be leaving _____ a few minutes.

- Ans
- 1. on
 - 2. in
 - 3. by
 - 4. at

Question Type : MCQ
Question ID : 630680287915
Option 1 ID : 6306801119570
Option 2 ID : 6306801119568
Option 3 ID : 6306801119569
Option 4 ID : 6306801119567
Status : Answered
Chosen Option : 2

Q.2 Parts of the following sentence have been given as options. Select the option that contains a grammatical error. If you don't find any error, mark 'No error' as your answer.

There were too many people into the bus.

- Ans**
- 1. There were
 - 2. No error
 - 3. too many people
 - 4. into the bus.

Question Type : **MCQ**

Question ID : **630680287918**

Option 1 ID : **6306801119579**

Option 2 ID : **6306801119582**

Option 3 ID : **6306801119580**

Option 4 ID : **6306801119581**

Status : **Answered**

Chosen Option : **3**

Q.3 Sentences of a paragraph are given below in jumbled order. Select the option that arranges the sentences in the correct order to form a meaningful and coherent paragraph.

A. The Hodja prayed fervently, but the mountain did not move.

B. He prayed more, but the mountain remained unmoved.

C. The Hodja was boasting about the power of his faith.

D. "If your faith is so strong, then pray for that mountain to come to you," said a sceptic, pointing to a mountain in the distance.

- Ans**
- 1. C, B, D, A
 - 2. B, D, C, A
 - 3. C, D, A, B
 - 4. D, C, A, B

Question Type : **MCQ**

Question ID : **630680287911**

Option 1 ID : **6306801119552**

Option 2 ID : **6306801119554**

Option 3 ID : **6306801119553**

Option 4 ID : **6306801119551**

Status : **Answered**

Chosen Option : **3**

Q.4 Select the most appropriate ANTONYM of the given word.

Delectable

- Ans
- 1. Delightful
 - 2. Distasteful
 - 3. Satisfying
 - 4. Heavenly

Question Type : MCQ
Question ID : 630680287902
Option 1 ID : 6306801119515
Option 2 ID : 6306801119516
Option 3 ID : 6306801119518
Option 4 ID : 6306801119517
Status : Answered
Chosen Option : 3

Q.5 Select the option that expresses the given sentence in active voice.

This laptop has already been repaired by my friend.

- Ans
- 1. My friend had already repaired this laptop.
 - 2. My friend is already repairing this laptop.
 - 3. My friend has already repaired this laptop.
 - 4. This laptop has already repaired my friend.

Question Type : MCQ
Question ID : 630680287926
Option 1 ID : 6306801119614
Option 2 ID : 6306801119612
Option 3 ID : 6306801119611
Option 4 ID : 6306801119613
Status : Answered
Chosen Option : 3

Q.6 Select the most appropriate option to fill in the blanks.

All the things in _____ house were to be divided among _____ three brothers.

Ans ✓ 1. the; the

✗ 2. a; the

✗ 3. No word required; the

✗ 4. the; No word required

Question Type : **MCQ**

Question ID : **630680287914**

Option 1 ID : **6306801119565**

Option 2 ID : **6306801119564**

Option 3 ID : **6306801119566**

Option 4 ID : **6306801119563**

Status : **Answered**

Chosen Option : **1**

Q.7 Sentences of a paragraph are given below in jumbled order. Select the option that arranges the sentences in the correct order to form a meaningful and coherent paragraph.

A. Mother came in with a tumbler of water in one hand and a plate of betel leaves and nuts in the other.

B. She gave him a little areca-nut and half a dozen neatly rolled betel leaves.

C. Father drank the water and held out his hand.

D. He put them all into his mouth, chewing them with great contentment.

Ans ✗ 1. A, D, C, B

✗ 2. A, B, C, D

✓ 3. A, C, B, D

✗ 4. A, B, D, C

Question Type : **MCQ**

Question ID : **630680287910**

Option 1 ID : **6306801119547**

Option 2 ID : **6306801119549**

Option 3 ID : **6306801119548**

Option 4 ID : **6306801119550**

Status : **Answered**

Chosen Option : **3**

Q.8 Select the option that expresses the given sentence in passive voice.

Pawan did not submit the assignment to the teacher.

Ans 1. The assignment did not submit Pawan to the teacher.

2.

The assignment was not being submitted by Pawan to the teacher.

3. The assignment was not submitted to Pawan by the teacher.

4. The assignment was not submitted by Pawan to the teacher.

Question Type : MCQ

Question ID : 630680287925

Option 1 ID : 6306801119607

Option 2 ID : 6306801119610

Option 3 ID : 6306801119609

Option 4 ID : 6306801119608

Status : Answered

Chosen Option : 4

Q.9 Select the option that expresses the given sentence in indirect speech.

My grandmother said, "I lived in Seychelles for two years."

Ans 1.

My grandmother said that I lived in Seychelles for two years.

2.

My grandmother told that she lived in Seychelles for two years.

3.

My grandmother said that she has lived in Seychelles for two years.

4.

My grandmother said that she had lived in Seychelles for two years.

Question Type : MCQ

Question ID : 630680287923

Option 1 ID : 6306801119599

Option 2 ID : 6306801119600

Option 3 ID : 6306801119602

Option 4 ID : 6306801119601

Status : Answered

Chosen Option : 4

Q.10 Select the sentence with the grammatically correct verb form.

- Ans
- 1. The ceremony has gone to take place this evening.
 - 2. The ceremony goes to take place this evening.
 - 3. The ceremony has been going to take place this evening.
 - 4. The ceremony is going to take place this evening.

Question Type : MCQ
Question ID : 630680287921
Option 1 ID : 6306801119593
Option 2 ID : 6306801119591
Option 3 ID : 6306801119594
Option 4 ID : 6306801119592
Status : Answered
Chosen Option : 4

Q.11 Select the option that can be used as a one-word substitute for the given group of words.

Dwarfed varieties of trees and shrubs in pots

- Ans
- 1. Bonsai
 - 2. Origami
 - 3. Bonanza
 - 4. Niwaki

Question Type : MCQ
Question ID : 630680287909
Option 1 ID : 6306801119543
Option 2 ID : 6306801119544
Option 3 ID : 6306801119545
Option 4 ID : 6306801119546
Status : Answered
Chosen Option : 1

Q.12 Select the most appropriate option to fill in the blank.

My daughter compiled this report all by _____.

- Ans
- 1. herself
 - 2. himself
 - 3. itself
 - 4. oneself

Question Type : MCQ
Question ID : 630680287916
Option 1 ID : 6306801119571
Option 2 ID : 6306801119574
Option 3 ID : 6306801119572
Option 4 ID : 6306801119573
Status : Answered
Chosen Option : 1

Q.13 Select the most appropriate option to fill in the blank.

Like her brother, Judith had _____ taste for the theatre.

- Ans
- 1. an
 - 2. a
 - 3. No word required
 - 4. the

Question Type : MCQ
Question ID : 630680287912
Option 1 ID : 6306801119556
Option 2 ID : 6306801119555
Option 3 ID : 6306801119558
Option 4 ID : 6306801119557
Status : Answered
Chosen Option : 2

Q.14 Parts of the following sentence have been given as options. Select the option that contains a spelling error. If you don't find any error, mark 'No error' as your answer.

Everyone seconded the preposal and it was approved unanimously.

- Ans
- 1. Everyone seconded
 - 2. No error
 - 3. the preposal and it
 - 4. was approved unanimously.

Question Type : MCQ
Question ID : 630680287904
Option 1 ID : 6306801119523
Option 2 ID : 6306801119526
Option 3 ID : 6306801119524
Option 4 ID : 6306801119525
Status : Answered
Chosen Option : 3

Q.15 Select the most appropriate meaning of the given proverb.

Don't bite the hand that feeds you.

- Ans
- ✓ 1. Don't hurt a person who is helping you.
 - ✗ 2. Don't expect a good result before you see it.
 - ✗ 3. Don't have a fight with your friend.
 - ✗ 4. Don't wait to do something for tomorrow.

Question Type : MCQ

Question ID : 630680287907

Option 1 ID : 6306801119538

Option 2 ID : 6306801119536

Option 3 ID : 6306801119537

Option 4 ID : 6306801119535

Status : Answered

Chosen Option : 1

Q.16 Parts of the following sentence have been given as options. Select the option that contains a grammatical error. If you don't find any error, mark 'No error' as your answer.

I will be late to work so I have to go to the dispensary.

- Ans
- ✗ 1. No error
 - ✓ 2. so I have to go
 - ✗ 3. I will be late to work
 - ✗ 4. to the dispensary.

Question Type : MCQ

Question ID : 630680287920

Option 1 ID : 6306801119590

Option 2 ID : 6306801119588

Option 3 ID : 6306801119587

Option 4 ID : 6306801119589

Status : Answered

Chosen Option : 2

Q.17 Parts of the following sentence have been given as options. Select the option that contains a grammatical error. If you don't find any error, mark 'No error' as your answer.

Stories can be easy written by developing on the given outline.

- Ans**
- ✓ 1. Stories can be easy written
 - ✗ 2. by developing on
 - ✗ 3. the given outline.
 - ✗ 4. No error

Question Type : MCQ

Question ID : 630680287919

Option 1 ID : 6306801119583

Option 2 ID : 6306801119584

Option 3 ID : 6306801119585

Option 4 ID : 6306801119586

Status : Answered

Chosen Option : 1

Q.18 Select the option that can be used as a one-word substitute for the given group of words.

The sound made by coins

- Ans**
- ✗ 1. Tinkling
 - ✓ 2. Jingling
 - ✗ 3. Creaking
 - ✗ 4. Rustling

Question Type : MCQ

Question ID : 630680287908

Option 1 ID : 6306801119541

Option 2 ID : 6306801119542

Option 3 ID : 6306801119540

Option 4 ID : 6306801119539

Status : Answered

Chosen Option : 1

Q.19 Select the most appropriate option to fill in the blank.

I used to go to my village on _____ rickety bus without feeling any strain of the journey.

- Ans
- 1. an
 - 2. a
 - 3. the
 - 4. No word required

Question Type : MCQ

Question ID : 630680287913

Option 1 ID : 6306801119560

Option 2 ID : 6306801119559

Option 3 ID : 6306801119561

Option 4 ID : 6306801119562

Status : Answered

Chosen Option : 2

Q.20 Select the most appropriate synonym of the given word.

Prudent

- Ans
- 1. Reckless
 - 2. Wasteful
 - 3. Hasty
 - 4. Sensible

Question Type : MCQ

Question ID : 630680287903

Option 1 ID : 6306801119520

Option 2 ID : 6306801119522

Option 3 ID : 6306801119521

Option 4 ID : 6306801119519

Status : Answered

Chosen Option : 4

Q.21 Select the sentence with the grammatically correct verb form.

- Ans
- 1. I was hungry as I had not eaten for six hours.
 - 2. I was hungry as I do not eat for six hours.
 - 3. I was hungry as I have not eaten for six hours.
 - 4. I was hungry as I am not eating for six hours.

Question Type : MCQ

Question ID : 630680287922

Option 1 ID : 6306801119596

Option 2 ID : 6306801119598

Option 3 ID : 6306801119595

Option 4 ID : 6306801119597

Status : Answered

Chosen Option : 1

Q.22 Select the most appropriate meaning of the given idiom.

Off the beaten track

- Ans
- 1. In a dangerous place
 - 2. In an isolated place
 - 3. In a popular place
 - 4. In a familiar place

Question Type : MCQ

Question ID : 630680287906

Option 1 ID : 6306801119534

Option 2 ID : 6306801119532

Option 3 ID : 6306801119531

Option 4 ID : 6306801119533

Status : Answered

Chosen Option : 4

Q.23 Select the most appropriate option to fill in the blank.

We cleaned the house properly _____ my friends were coming for lunch.

- Ans
- 1. because
 - 2. even if
 - 3. so that
 - 4. although

Question Type : MCQ

Question ID : 630680287917

Option 1 ID : 6306801119576

Option 2 ID : 6306801119578

Option 3 ID : 6306801119575

Option 4 ID : 6306801119577

Status : Answered

Chosen Option : 1

Q.24 Parts of the following sentence have been given as options. Select the option that contains a spelling error. If you don't find any error, mark 'No error' as your answer.

His fertile brain quickly thought of a new manoeuvre to discumfit his brother.

- Ans**
- 1. thought of a new manoeuvre
 - 2. to discumfit his brother.
 - 3. No error
 - 4. His fertile brain quickly

Question Type : MCQ
Question ID : 630680287905
Option 1 ID : 6306801119528
Option 2 ID : 6306801119529
Option 3 ID : 6306801119530
Option 4 ID : 6306801119527
Status : Answered
Chosen Option : 3

Q.25 Select the option that expresses the given sentence in direct speech.

Avika said that her exams were going to begin the following week.

- Ans**
- 1. Avika said, "Her exams are going to begin the following week."
 - 2. Avika said, "My exams are going to begin next week."
 - 3. Avika said, "My exams were going to begin the following week."
 - 4. Avika said, "Her exams were going to begin next week."

Question Type : MCQ
Question ID : 630680287924
Option 1 ID : 6306801119605
Option 2 ID : 6306801119606
Option 3 ID : 6306801119603
Option 4 ID : 6306801119604
Status : Answered
Chosen Option : 2

Section : General Knowledge

Q.1 Cardamom Hills or Yela Mala are located in which of the following parts of India?

- Ans
- ✓ 1. South India
 - ✗ 2. North India
 - ✗ 3. East India
 - ✗ 4. West India

Question Type : MCQ

Question ID : 630680287941

Option 1 ID : 6306801119671

Option 2 ID : 6306801119672

Option 3 ID : 6306801119673

Option 4 ID : 6306801119674

Status : Answered

Chosen Option : 3

Q.2 Which of the following equations well defines the Current Account Deficit?

- Ans
- ✓ 1. Value of Exports < Value of Imports
 - ✗ 2. Value of Exports > Value of Imports
 - ✗ 3. Value of Exports \geq Value of Imports
 - ✗ 4. Value of Exports = Value of Imports

Question Type : MCQ

Question ID : 630680287938

Option 1 ID : 6306801119660

Option 2 ID : 6306801119659

Option 3 ID : 6306801119662

Option 4 ID : 6306801119661

Status : Answered

Chosen Option : 1

Q.3 From which of the following stations was the first Vande Bharat Express of the state of Madhya Pradesh started in April 2023?

- Ans
- ✗ 1. Indore
 - ✗ 2. Gwalior
 - ✗ 3. Jabalpur
 - ✓ 4. Bhopal

Question Type : MCQ

Question ID : 630680287944

Option 1 ID : 6306801119683

Option 2 ID : 6306801119686

Option 3 ID : 6306801119685

Option 4 ID : 6306801119684

Status : Answered

Chosen Option : 1

Q.4 खालीलपैकी कोणत्या वर्षी कर्नाटकातील शास्त्रीय गायिका एम. एस. सुब्बुलक्ष्मी यांना भारतरत्न पुरस्काराने गौरवण्यात आले?

- Ans
- ✗ 1. 1999
 - ✗ 2. 1996
 - ✓ 3. 1998
 - ✗ 4. 1997

Question Type : MCQ
Question ID : 630680287935
Option 1 ID : 6306801119647
Option 2 ID : 6306801119650
Option 3 ID : 6306801119648
Option 4 ID : 6306801119649
Status : Answered
Chosen Option : 3

Q.5 भारतीय राज्यघटनेतील खालीलपैकी कोणता अनुच्छेद भारतीय वित्त आयोगाशी संबंधित आहे?

- Ans
- ✓ 1. अनुच्छेद 280
 - ✗ 2. अनुच्छेद 279
 - ✗ 3. अनुच्छेद 275
 - ✗ 4. अनुच्छेद 276

Question Type : MCQ
Question ID : 630680287949
Option 1 ID : 6306801119706
Option 2 ID : 6306801119705
Option 3 ID : 6306801119703
Option 4 ID : 6306801119704
Status : Answered
Chosen Option : 1

Q.6 केंद्रीय अर्थसंकल्पात 2023-24 या वर्षाकरिता MGNREGA (मनरेगा) योजनेसाठी _____ ची तरतूद करण्यात आली आहे.

- Ans
- ✗ 1. ₹65,000 कोटी
 - ✗ 2. ₹50,000 कोटी
 - ✗ 3. ₹55,000 कोटी
 - ✓ 4. ₹60,000 कोटी

Question Type : MCQ
Question ID : 630680287939
Option 1 ID : 6306801119666
Option 2 ID : 6306801119663
Option 3 ID : 6306801119664
Option 4 ID : 6306801119665
Status : Answered
Chosen Option : 4

Q.7 मार्च 2023 मध्ये, खालीलपैकी कोणत्या राष्ट्रीय उद्यानात नामिबियातील स्थलांतरित चित्त्याने चार बछड्यांना जन्म दिला?

- Ans
- 1. जीम कॉर्बेट राष्ट्रीय उद्यान
 - 2. रणथंबोर राष्ट्रीय उद्यान
 - 3. कुनो राष्ट्रीय उद्यान
 - 4. गिर राष्ट्रीय उद्यान

Question Type : MCQ
Question ID : 630680287942
Option 1 ID : 6306801119676
Option 2 ID : 6306801119678
Option 3 ID : 6306801119677
Option 4 ID : 6306801119675
Status : Answered
Chosen Option : 3

Q.8 Vedantam Lakshminarayana Sastri is associated with which of the following classical dances of India?

- Ans
- 1. Manipuri
 - 2. Kuchipudi
 - 3. Mohiniyattam
 - 4. Odissi


Question Type : MCQ
Question ID : 630680287934
Option 1 ID : 6306801119645
Option 2 ID : 6306801119643
Option 3 ID : 6306801119644
Option 4 ID : 6306801119646
Status : Answered
Chosen Option : 2

Q.9 Which of the following schemes focuses on the prevention of trafficking and rescue, rehabilitation and re-integration of victims of trafficking for commercial sexual exploitation?

- Ans
- 1. Ujjawala
 - 2. Nirbhaya
 - 3. Sakhi
 - 4. Nandini

Question Type : MCQ
Question ID : 630680287940
Option 1 ID : 6306801119669
Option 2 ID : 6306801119667
Option 3 ID : 6306801119668
Option 4 ID : 6306801119670
Status : Answered
Chosen Option : 4

Q.10 Milkha Singh, the son of an Indian athlete and Nirmal Saini, the former captain of Indian women's volleyball team are associated with which of the following sports?

- Ans
- 1. Football
 - 2. Golf
 - 3. Hockey
 - 4. 

Question Type : MCQ
Question ID : 630680287951
Option 1 ID : 6306801119713
Option 2 ID : 6306801119712
Option 3 ID : 6306801119714
Option 4 ID : 6306801119711
Status : Answered
Chosen Option : 1

Q.11 

- Ans
- 1. 
 - 2. 
 - 3. 
 - 4. 

Question Type : MCQ
Question ID : 630680287946
Option 1 ID : 6306801119691
Option 2 ID : 6306801119693
Option 3 ID : 6306801119692
Option 4 ID : 6306801119694
Status : Answered
Chosen Option : 1

Q.12 कल्काप्रसाद महाराज हे भारतातील खालीलपैकी कोणत्या शास्त्रीय नृत्याशी संबंधित आहेत?

- Ans
- 1. कुचिपुडी
 - 2. कथक
 - 3. मणिपुरी
 - 4. ओडिसी

Question Type : MCQ
Question ID : 630680287933
Option 1 ID : 6306801119639
Option 2 ID : 6306801119642
Option 3 ID : 6306801119640
Option 4 ID : 6306801119641
Status : Answered
Chosen Option : 2

Q.13 Which of the following animals does NOT belong to the phylum Arthropoda?

- Ans
- 1. Millipedes
 - 2. Mosquito
 - 3. Leech
 - 4. House fly

Question Type : MCQ
Question ID : 630680287947
Option 1 ID : 6306801119697
Option 2 ID : 6306801119696
Option 3 ID : 6306801119698
Option 4 ID : 6306801119695
Status : Answered
Chosen Option : 3

Q.14 Zahir ud-Din Muhammad was the name of which of the following Mughal emperors?

- Ans
- 1. Humayun
 - 2. Akbar
 - 3. Jahangir
 - 4. Babur

Question Type : MCQ
Question ID : 630680287927
Option 1 ID : 6306801119615
Option 2 ID : 6306801119617
Option 3 ID : 6306801119618
Option 4 ID : 6306801119616
Status : Answered
Chosen Option : 4

Q.15 भारतीय राज्यघटनेतील खालीलपैकी कोणता अनुच्छेद शिक्षणाच्या अधिकाराशी संबंधित आहे?

- Ans
- 1. अनुच्छेद 22-A
 - 2. अनुच्छेद 20-A
 - 3. अनुच्छेद 21-A
 - 4. अनुच्छेद 23-A

Question Type : MCQ
Question ID : 630680287948
Option 1 ID : 6306801119701
Option 2 ID : 6306801119699
Option 3 ID : 6306801119700
Option 4 ID : 6306801119702
Status : Answered
Chosen Option : 3

Q.16 खालीलपैकी कोणत्या वर्षी सार्वजनिक भविष्य निर्वाह निधीची (PPF) सुरुवात करण्यात आली?

- Ans
- 1. 1971
 - 2. 1969
 - 3. 1970
 - 4. 1968

Question Type : MCQ

Question ID : 630680287937

Option 1 ID : 6306801119658

Option 2 ID : 6306801119656

Option 3 ID : 6306801119657

Option 4 ID : 6306801119655

Status : Answered

Chosen Option : 1

Q.17 2022 साली पंतप्रधान नरेंद्र मोदी यांनी उद्घाटन केलेले 'महाकाल कॉरिडोर' भारतातील खालीलपैकी कोणत्या शहरात आहे?

- Ans
- 1. वाराणसी
 - 2. जयपूर
 - 3. प्रयागराज
 - 4. उज्जैन

Question Type : MCQ

Question ID : 630680287931

Option 1 ID : 6306801119634

Option 2 ID : 6306801119632

Option 3 ID : 6306801119633

Option 4 ID : 6306801119631

Status : Answered

Chosen Option : 4

Q.18 Which of the following classical dances of India was earlier known as Sadir Aatam?

- Ans
- 1. Bharatanatyam
 - 2. Kathakali
 - 3. Manipuri
 - 4. Kuchipudi

Question Type : MCQ

Question ID : 630680287932

Option 1 ID : 6306801119637

Option 2 ID : 6306801119638

Option 3 ID : 6306801119636

Option 4 ID : 6306801119635

Status : Answered

Chosen Option : 1

Q.19 2023 मध्ये आसामचे राज्यपाल बनलेले गुलाबचंद कटारिया हे भारताच्या कोणत्या राज्यातील आहेत?

- Ans
- 1. उत्तर प्रदेश
 - 2. हरियाणा
 - 3. मध्य प्रदेश
 - 4. राजस्थान

Question Type : MCQ
Question ID : 630680287950
Option 1 ID : 6306801119707
Option 2 ID : 6306801119709
Option 3 ID : 6306801119710
Option 4 ID : 6306801119708
Status : Answered
Chosen Option : 4

Q.20 2023-24 च्या केंद्रीय अर्थसंकल्पात ज्येष्ठ नागरिक बचत योजनेसाठी (एससीएसएस) कमाल गुंतवणुकीची मर्यादा 15 लाख रुपयांवरून _____ करण्यात आली.

- Ans
- 1. ₹35 लाख
 - 2. ₹20 लाख
 - 3. ₹30 लाख
 - 4. ₹25 लाख

Question Type : MCQ
Question ID : 630680287936
Option 1 ID : 6306801119654
Option 2 ID : 6306801119651
Option 3 ID : 6306801119653
Option 4 ID : 6306801119652
Status : Answered
Chosen Option : 3

Q.21 2011 च्या जनगणनेनुसार, नागालँड राज्यात खालीलपैकी कोणता धर्म सर्वात प्रभावी आहे?

- Ans
- 1. ख्रिश्चन
 - 2. मुस्लिम
 - 3. बौद्ध
 - 4. हिंदु

Question Type : MCQ
Question ID : 630680287943
Option 1 ID : 6306801119680
Option 2 ID : 6306801119681
Option 3 ID : 6306801119679
Option 4 ID : 6306801119682
Status : Answered
Chosen Option : 1

Q.22 Masroor Temples or Rock-cut Temples are located in which of the following states?

- Ans 1. Himachal Pradesh
 2. Odisha
 3. Uttarakhand
 4. Madhya Pradesh

Question Type : MCQ

Question ID : 630680287930

Option 1 ID : 6306801119627

Option 2 ID : 6306801119629

Option 3 ID : 6306801119628

Option 4 ID : 6306801119630

Status : Answered

Chosen Option : 2

Q.23 The Joka-Taratala stretch of the Metro network's Purple line, which was inaugurated by PM Narendra Modi, is located in which of the following states of India?

- Ans 1. Karnataka
 2. Telangana
 3. West Bengal
 4. Assam

Question Type : MCQ

Question ID : 630680287945

Option 1 ID : 6306801119687

Option 2 ID : 6306801119689

Option 3 ID : 6306801119688

Option 4 ID : 6306801119690

Status : Answered

Chosen Option : 3

Q.24 24 जुलै 1985 रोजी हरचंद सिंग लॉगोवाल यांच्यासोबत पंजाब करारावर स्वाक्षरी करण्यात आली, तेव्हा भारताचे पंतप्रधान कोण होते?

- Ans 1. इंद्रकुमार गुजराल
 2. विश्वनाथ प्रताप सिंग
 3. चंद्रशेखर
 4. राजीव गांधी

Question Type : MCQ

Question ID : 630680287928

Option 1 ID : 6306801119620

Option 2 ID : 6306801119621

Option 3 ID : 6306801119619

Option 4 ID : 6306801119622

Status : Answered

Chosen Option : 4





Q.25 The government of former Pakistani prime minister Zulfikar Ali Bhutto was seized by which of the following chief of army staff on 5 July 1977?

- Ans**
- 1. Asif Nawaz Janjua
 - 2. Mohammad Zia-ul-Haq
 - 3. Agha Muhammad Yahya Khan
 - 4. Tikka Khan

Question Type : **MCQ**
Question ID : **630680287929**
Option 1 ID : **6306801119625**
Option 2 ID : **6306801119624**
Option 3 ID : **6306801119623**
Option 4 ID : **6306801119626**
Status : **Answered**
Chosen Option : **2**

Section : **Mental Ability**

Q.1 In the team of players, there are some who are only football players and some who are only volleyball players. A few are both football players and volleyball players. Besides these there are others who are kabaddi players. Some of these kabaddi players also play either football or volleyball or both. Which of the following figures represents these facts?

- Ans**
- 1. 
 - 2. 
 - 3. 
 - 4. 

Question Type : **MCQ**
Question ID : **630680287957**
Option 1 ID : **6306801119735**
Option 2 ID : **6306801119736**
Option 3 ID : **6306801119738**
Option 4 ID : **6306801119737**
Status : **Answered**
Chosen Option : **4**

Q.2 जर 'A + B' म्हणजे 'A ही B ची बहीण आहे', 'A - B' म्हणजे A हा B चा भाऊ आहे, 'A × B' म्हणजे 'A ही B ची मुलगी आहे', तर खालीलपैकी कोणता पर्याय, 'F ही आई असलेल्या D चा मामा E आहे', असे दर्शवतो?

- Ans
- 1. $D + F - E$
 - 2. $D \times F + E$
 - 3. $D - F \times E$
 - 4. $D + F \times E$

Question Type : MCQ

Question ID : 630680287964

Option 1 ID : 6306801119764

Option 2 ID : 6306801119766

Option 3 ID : 6306801119765

Option 4 ID : 6306801119763

Status : Answered

Chosen Option : 2

Q.3 Read the following information carefully and answer the question that follows.

Seven people Oliver, Jack, Harry, Jacob, Charlie, Callum and Mason, each have their own floor in a seven-storey skyscraper. The ground floor is the first floor, which is referred to as 1. Subsequent floors are 2,3 and so on, all the way to the top floor, which is floor number 7. These travellers' final destinations are Varanasi, Warangal, Hyderabad, Jaipur, Rourkela, Kanpur, and Madras, though not necessarily in that order. There is only one resident in between Oliver and the traveller to Kanpur. Just below the individual travelling to Warangal is where Callum lives. The traveller who lives on an even-numbered floor is headed to Warangal. Charlie won't be visiting Hyderabad. Between Jack and the person going to Rourkela, there are only two people to be found. The person going to Rourkela resides below the floor where Jack occupies. The person going to Varanasi doesn't reside either above or right below Jack. Oliver does not have a neighbour named Jacob living directly above or below him. Mason avoids visiting Jaipur.

Which of the following could be true with respect to Mason as per the given information?

- Ans
- 1. Mason lives on the lowermost floor.
 - 2. The one who lives immediately below Mason is travelling to Warangal.
 - 3. Mason lives immediately below Charlie.
 - 4. Mason is travelling to Kanpur.

Question Type : MCQ

Question ID : 630680287955

Option 1 ID : 6306801119729

Option 2 ID : 6306801119727

Option 3 ID : 6306801119728

Option 4 ID : 6306801119730

Status : Answered

Chosen Option : 2

Q.4 दिलेल्या आकृतीची योग्य जल प्रतिमा निवडा.

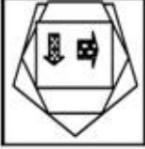


Ans

✗ 1.



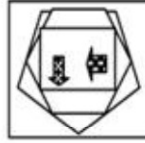
✗ 2.



✗ 3.



✓ 4.



Question Type : MCQ

Question ID : 630680287969

Option 1 ID : 6306801119785

Option 2 ID : 6306801119783

Option 3 ID : 6306801119786

Option 4 ID : 6306801119784

Status : Answered

Chosen Option : 4

Q.5 खालील पदावलीत प्रश्नचिन्हाच्या (?) जागी येऊ शकणारे अंदाजे मूल्य दिलेल्या पर्यायांतून निवडा.

$$11.58 - 6.01 + 21.78 \times 5.18 = ?$$

Ans

✗ 1. 165

✓ 2. 118

✗ 3. 238

✗ 4. 155

Question Type : MCQ

Question ID : 630680287974

Option 1 ID : 6306801119803

Option 2 ID : 6306801119805

Option 3 ID : 6306801119806

Option 4 ID : 6306801119804

Status : Answered

Chosen Option : 2

Q.6 90 लोकांच्या गटात, स्त्रियांची संख्या ही पुरुषांपेक्षा जास्त असून त्यांचे गुणोत्तर 2: 1 इतके होते. नारायण हा एकोणिसाव्या स्थानावर होता.

नारायणच्या आधी क्रमांक असलेल्या सात स्त्रिया असतील, तर किती पुरुषांचा क्रमांक त्याच्या नंतर असेल?

- Ans
- 1. 13
 - 2. 22
 - 3. 18
 - 4. 27

Question Type : MCQ

Question ID : 630680287954

Option 1 ID : 6306801119723

Option 2 ID : 6306801119725

Option 3 ID : 6306801119726

Option 4 ID : 6306801119724

Status : Answered

Chosen Option : 3

Q.7 चार अक्षर समूह दिलेले आहेत, त्यांपैकी तीन एका विशिष्ट प्रकारे समान आहेत आणि एक वेगळा आहे. तो वेगळा अक्षर समूह निवडा.

- Ans
- 1. OQUS
 - 2. RTSV
 - 3. PRQT
 - 4. MONQ

Question Type : MCQ

Question ID : 630680287962

Option 1 ID : 6306801119757

Option 2 ID : 6306801119758

Option 3 ID : 6306801119756

Option 4 ID : 6306801119755

Status : Answered

Chosen Option : 1

Q.8 एका विशिष्ट सांकेतिक भाषेत,

'P + Q' म्हणजे 'P हे Q चे वडील आहेत.

'P - Q' म्हणजे 'P ही Q ची आई आहे'.

'P × Q' म्हणजे 'P हा Q चा भाऊ आहे'.

'P+ Q' म्हणजे 'P ही Q ची बहीण आहे'.

'P @ Q' म्हणजे 'P हा Q चा मुलगा आहे'.

'P # Q' म्हणजे 'P ही Q ची मुलगी आहे'.

वरील माहितीच्या आधारे, 'A + B × C+ D @ E# F' असल्यास D चे F सोबत काय नाते आहे?

Ans

✗ 1. नात (मुलाची मुलगी)

✗ 2. नातू (मुलाचा मुलगा)

✗ 3. नात (मुलीची मुलगी)

✓ 4. नातू (मुलीचा मुलगा)

Question Type : MCQ

Question ID : 630680287963

Option 1 ID : 6306801119761

Option 2 ID : 6306801119759

Option 3 ID : 6306801119762

Option 4 ID : 6306801119760

Status : Answered

Chosen Option : 4

Q.9 चार अक्षर समूह दिलेले आहेत, त्यांपैकी तीन एका विशिष्ट प्रकारे समान आहेत आणि एक वेगळा आहे. तो वेगळा अक्षर समूह निवडा.

Ans

✗ 1. CV

✗ 2. EZ

✗ 3. DX

✓ 4. AM

Question Type : MCQ

Question ID : 630680287961

Option 1 ID : 6306801119753

Option 2 ID : 6306801119751

Option 3 ID : 6306801119752

Option 4 ID : 6306801119754

Status : Answered

Chosen Option : 4

Q.10 खालील मालिकेत येणारे पुढील पद ओळखा.

DIE, XCY, RWS

- Ans 1. LQM
 2. LMS
 3. QMP
 4. LQN

Question Type : MCQ

Question ID : 630680287960

Option 1 ID : 6306801119750

Option 2 ID : 6306801119749

Option 3 ID : 6306801119748

Option 4 ID : 6306801119747

Status : Answered

Chosen Option : 1

Q.11 A software employee walked out from the office towards the reception. He went first to the canteen on the left side, 24 m away. After a cup of tea, he took a right turn and went to the greeting area 13 m away. Then he went to the Phone rooms, 15 m to the left. He talked to a friend, in the Kitchen 3 m on the left and continued walking in the same direction to the reception, 10 m more. What was the actual distance between the reception and the office?

- Ans 1. 42 m
 2. 52 m
 3. 62 m
 4. 39 m

Question Type : MCQ

Question ID : 630680287966

Option 1 ID : 6306801119772

Option 2 ID : 6306801119771

Option 3 ID : 6306801119774

Option 4 ID : 6306801119773

Status : Answered

Chosen Option : 4

Q.12 Read the given statements and conclusions carefully. Assuming that the information given in the statements is true, even if it appears to be at variance with commonly known facts, decide which of the given conclusions logically follow(s) from the statement(s).

Statements:

All Plugs are pens.

All pens are mice.

All mice are laptops.

Conclusions:

(I) All laptops are mice.

(II) All mice are pens.

(III) All pens are Plugs.

(IV) All Plugs are laptops.

- Ans**
- 1. All the conclusions follow
 - 2. Only IV follows
 - 3. None of the conclusions follow
 - 4. Only conclusion III and IV follow

Question Type : **MCQ**

Question ID : **630680287956**

Option 1 ID : **6306801119733**

Option 2 ID : **6306801119734**

Option 3 ID : **6306801119731**

Option 4 ID : **6306801119732**

Status : **Answered**

Chosen Option : **2**

Q.13 Two statements numbered I and II are given. There may be cause and effect relationship between the two statements. These two statements may be the effect of the same cause or independent causes. These statements may be independent causes without having any relationship. Read both the statements and select the correct option.

I. The rate of alcoholism in the states has been increasing for the last eight years.

II. For the staff members working on the literacy campaign, the district administration has organized rigorous training programs.

- Ans**
- 1. Statement I is the cause and statement II is its effects.
 - 2.
 - Both the statements I and II are effects of independent causes.
 - 3. Statement II is the cause and statement I is its effects.
 - 4. Both the statements I and II are independent causes.

Question Type : **MCQ**

Question ID : **630680287967**

Option 1 ID : **6306801119775**

Option 2 ID : **6306801119778**

Option 3 ID : **6306801119776**

Option 4 ID : **6306801119777**

Status : **Answered**

Chosen Option : **2**

Q.14 खालील मालिकेत प्रश्नचिन्हाच्या (?) जागी येऊ शकेल, अशी संख्या दिलेल्या पर्यायांतून निवडा.

3, 6, 18, 72, ?

- Ans
- 1. 144
 - 2. 360
 - 3. 89
 - 4. 240

Question Type : MCQ

Question ID : 630680287972

Option 1 ID : 6306801119797

Option 2 ID : 6306801119796

Option 3 ID : 6306801119798

Option 4 ID : 6306801119795

Status : Answered

Chosen Option : 2

Q.15 खालील माहितीचा लक्षपूर्वक अभ्यास करा आणि दिलेल्या प्रश्नाचे उत्तर द्या.

एका तायक्वांदो संघात, रोहन, प्रजा, मोनिका, नताशा, वनजा, ज्वाला, गोपी आणि सायना हे एका चौकोनी टेबलाभोवती अशाप्रकारे बसले आहेत की, त्यांच्यापैकी चार जण चौरसाच्या चार कोपऱ्यांपाशी बसलेले आहेत, तर चार जण चारही बाजूंच्या मध्यभागी बसले आहेत. जे चार कोपऱ्यांपाशी बसलेले आहेत, त्यांचे तोंड बाहेरील दिशेला आहे, तर जे बाजूंच्या मध्यभागी बसलेले आहेत, ते टेबलाच्या केंद्राभिमुख बसलेले आहेत. नताशा ही गोपीच्या उजवीकडे तिसऱ्या स्थानावर बसली आहे. गोपी केंद्राभिमुख बसलेला आहे. बाजूंच्या मध्यभागी न बसलेल्या मोनिकाच्या डावीकडे तिसऱ्या स्थानी वनजा बसलेली आहे. वनजा आणि ज्वाला यांच्यामध्ये फक्त एकच व्यक्ती बसली आहे. ज्वाला ही मोनिकाची लगतची शेजारी नाही. केंद्राभिमुख बसलेली आहे. रोहन हा ज्वालाचा लगतचा शेजारी नाही.

प्रजाच्या संदर्भात मोनिकाचे स्थान कोणते आहे?

- Ans
- 1. उजवीकडे तिसरे
 - 2. डावीकडे पहिले
 - 3. डावीकडे दुसरे
 - 4. उजवीकडे दुसरे

Question Type : MCQ

Question ID : 630680287952

Option 1 ID : 6306801119715

Option 2 ID : 6306801119716

Option 3 ID : 6306801119718

Option 4 ID : 6306801119717

Status : Answered

Chosen Option : 3

Q.16 'WASH' हा इंग्रजी वर्णक्रमानुसार एका विशिष्टप्रकारे 'XBTI' शी संबंधित आहे. त्याच प्रकारे, 'CLOT' हा 'DMPU' शी संबंधित आहे. याच तर्कानुसार 'CAGE' खालीलपैकी कशाशी संबंधित आहे?

- Ans
- 1. ECIG
 - 2. DBHF
 - 3. FBDK
 - 4. GBEH

Question Type : MCQ

Question ID : 630680287959

Option 1 ID : 6306801119745

Option 2 ID : 6306801119746

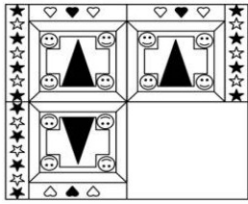
Option 3 ID : 6306801119744

Option 4 ID : 6306801119743

Status : Answered

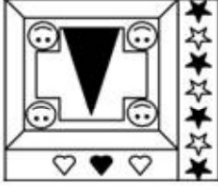
Chosen Option : 2

Q.17 दिलेल्या आकृतीतील रिकाम्या जागी ठेवल्यास आकृतिबंधास पूर्ण करू शकेल अशी आकृती दिलेल्या पर्यायांमधून निवडा.



Ans


✗ 1.



✓ 2.



✗ 3.



✗ 4.



Question Type : MCQ

Question ID : 630680287976

Option 1 ID : 6306801119813

Option 2 ID : 6306801119814

Option 3 ID : 6306801119811

Option 4 ID : 6306801119812

Status : Answered

Chosen Option : 2

Q.18 एका कागदाच्या तुकड्याला दुमडण्याचा क्रम आणि तो दुमडलेला कागद कोणत्या पद्धतीने कापला जातो हे खालील आकृत्यांमध्ये दर्शविले आहे. हा कागद उलगडल्यावर कसा दिसेल?



Ans

✗ 1.



✗ 2.



✓ 3.



✗ 4.



Question Type : MCQ

Question ID : 630680287970

Option 1 ID : 6306801119790

Option 2 ID : 6306801119789

Option 3 ID : 6306801119787

Option 4 ID : 6306801119788

Status : Answered

Chosen Option : 3

Q.19 Two statements numbered I and II are given. There may be cause and effect relationship between the two statements. These two statements may be the effect of the same cause or independent causes. These statements may be independent causes without having any relationship. Read both the statements and select the correct option.

I. Spending more time on social media can cause individuals to experience feelings of anxiety and low self-esteem.

II. The use of social media causes individuals to engage in social comparison, which leads to feelings of inadequacy and unhappiness.

Ans ✗ 1.

Both the statements I and II are effects of independent causes.

✗ 2. Both the statements I and II are independent causes.

✓ 3. Statement II is the cause and statement I is its effects.

✗ 4. Statement I is the cause and statement II is its effects.

Question Type : MCQ

Question ID : 630680287968

Option 1 ID : 6306801119782

Option 2 ID : 6306801119781

Option 3 ID : 6306801119780

Option 4 ID : 6306801119779

Status : Answered

Chosen Option : 3

Q.20 एका विशिष्ट सांकेतिक भाषेत, 'do you listen' हे 'gp mp rc' म्हणून संकेतबद्ध केले जाते आणि 'listen to the rules' हे 'mp u bo hk' असे संकेतबद्ध केले जाते. त्या भाषेत 'listen' हे कसे संकेतबद्ध केले जाते?

- Ans 1. mp
 2. hk
 3. rc
 4. bo

Question Type : MCQ
Question ID : 630680287965
Option 1 ID : 6306801119768
Option 2 ID : 6306801119770
Option 3 ID : 6306801119769
Option 4 ID : 6306801119767
Status : Answered
Chosen Option : 1

Q.21 खालील पदावलीत प्रश्नचिन्हाच्या (?) जागी येऊ शकणारे अंदाजे मूल्य दिलेल्या पर्यायांतून निवडा.

$$164 + 8 - 54 \times 48 \div 24 = ?$$

- Ans 1. 56
 2. 86
 3. 64
 4. 34

Question Type : MCQ
Question ID : 630680287975
Option 1 ID : 6306801119810
Option 2 ID : 6306801119807
Option 3 ID : 6306801119808
Option 4 ID : 6306801119809
Status : Answered
Chosen Option : 3

Q.22 खालील मालिकेत प्रश्नचिन्हाच्या (?) जागी येऊ शकेल, अशी संख्या दिलेल्या पर्यायांतून निवडा.

$$3, 10, 21, 36, 55, ?$$

- Ans 1. 82
 2. 95
 3. 65
 4. 78

Question Type : MCQ
Question ID : 630680287971
Option 1 ID : 6306801119793
Option 2 ID : 6306801119794
Option 3 ID : 6306801119791
Option 4 ID : 6306801119792
Status : Answered
Chosen Option : 4

Q.23 खालील मालिकेत प्रश्नचिन्हाच्या (?) जागी येऊ शकेल, अशी संख्या दिलेल्या पर्यायांतून निवडा.

4, 5, 9, 18, 34, ?

Ans 1. 55

2. 57

3. 59

4. 50

Question Type : MCQ

Question ID : 630680287973

Option 1 ID : 6306801119800

Option 2 ID : 6306801119801

Option 3 ID : 6306801119802

Option 4 ID : 6306801119799

Status : Answered

Chosen Option : 3

Q.24 a-cac-c-b-ca—b

-2--32-12-----

The given two series are related. Find the last five numbers of the number series.

Ans 1. 32132

2. 31223

3. 33212

4. 31232

Question Type : MCQ

Question ID : 630680287958

Option 1 ID : 6306801119739

Option 2 ID : 6306801119741

Option 3 ID : 6306801119742

Option 4 ID : 6306801119740

Status : Answered

Chosen Option : 4

Q.25 Read the following information carefully and answer the question that follows.

A team of nine members, Abid, Bharat, Chand, Deep, Eswar, Farooq, Gani, Heman and Ilaya are sitting in a straight linear row facing towards the north. Bharat is sitting third to the left of Eswar. Gani is on the immediate right of Abid, who sits second to the left of Bharat. Deep sits exactly in the middle of the row. Bharat is not an immediate neighbour of Deep and Heman. Chand sits to the immediate left of Heman. Ilaya is adjacent to Eswar.

How many people sit to the left of Eswar?

- Ans**
- 1. 2
 - 2. 6
 - 3. 3
 - 4. 5

Question Type : **MCQ**

Question ID : **630680287953**

Option 1 ID : **6306801119722**

Option 2 ID : **6306801119720**

Option 3 ID : **6306801119719**

Option 4 ID : **6306801119721**

Status : **Answered**

Chosen Option : **4**