


Participant ID	00
Participant Name	www.mpscmaterial.com
Test Center Name	iON DIGITAL ZONE iDZ 2 WADI MIDC
Test Date	10/09/2023
Test Time	4:30 PM - 6:30 PM
Subject	Talathi
Registration Photograph	
Capture Photo	
Upload Photo	

Q.1 'मनात मांडे खाणे' या वाक्यचाराचा योग्य अर्थ सांगा.

- Ans
- 1. पर्वा करणे
 - 2. मनोरंजन करणे
 - 3. मनात पक्के ठरवणे
 - 4. मनोराज्य करणे

Question Type : MCQ

Question ID : 630680304685

Option 1 ID : 6306801185289

Option 2 ID : 6306801185291

Option 3 ID : 6306801185292

Option 4 ID : 6306801185290

Status : Answered

Chosen Option : 3

Marks : 0

Q.2 साहित्य अकादमी पुरस्कार प्राप्त 'हरवलेले दिवस' या आत्मचरित्राचे लेखक कोण आहेत?

- Ans
- 1. प्रभाकर उध्वरिषे
 - 2. प्रभाकर पाध्ये
 - 3. गोदावरी परुळेकर
 - 4. गो .नी. दांडेकर

Question Type : MCQ

Question ID : 630680304690

Option 1 ID : 6306801185309

Option 2 ID : 6306801185310

Option 3 ID : 6306801185311

Option 4 ID : 6306801185312

Status : Answered

Chosen Option : 4

Marks : 0

Q.3 'उपाय करण्याआधीच त्रास नाहीसा होणे' या अर्थाचा वाक्यचार शोधा.

- Ans
- 1. साखरपेरणी करणे
 - 2. तिखटमीठ लावून सांगणे
 - 3. सुंठी वाचून खोकला जाणे
 - 4. अंगाला हळद लागणे

Question Type : MCQ

Question ID : 630680304686

Option 1 ID : 6306801185296

Option 2 ID : 6306801185294

Option 3 ID : 6306801185295

Option 4 ID : 6306801185293

Status : Answered

Chosen Option : 3

Marks : 2

Q.4 'अंथरूण पांघरूण' हा समास ओळखा.

- Ans 1. समाहार द्वंद्व
 2. अव्ययीभाव
 3. द्विगू
 4. विभक्ती तत्पुरुष

Question Type : MCQ

Question ID : 630680304680

Option 1 ID : 6306801185271

Option 2 ID : 6306801185272

Option 3 ID : 6306801185269

Option 4 ID : 6306801185270

Status : Answered

Chosen Option : 1

Marks : 2

Q.5 वाहवा ! तू वाचून घेतलेस निवेदन ! हे वाक्य आज्ञार्थी करा.

- Ans 1. तू निवेदन वाचून घे.
 2. तू निवेदन वाचून घेतलेस का ?
 3. तू निवेदन वाचून घेऊ नकोस.
 4. तू निवेदन वाचून घ्यावेस.

Question Type : MCQ

Question ID : 630680304669

Option 1 ID : 6306801185225

Option 2 ID : 6306801185227

Option 3 ID : 6306801185226

Option 4 ID : 6306801185228

Status : Answered

Chosen Option : 4

Marks : 0

Q.6 'रूखरूख' या शब्दाचा समानार्थी शब्द शोधा.

- Ans 1. आनंद
 2. दुःख
 3. टोचणी
 4. नजर

Question Type : MCQ

Question ID : 630680304676

Option 1 ID : 6306801185256

Option 2 ID : 6306801185255

Option 3 ID : 6306801185253

Option 4 ID : 6306801185254

Status : Answered

Chosen Option : 4

Marks : 0

Q.7 'तीक्ष्ण' या शब्दाचा विरुद्धार्थी शब्द शोधा.

- Ans
- 1. दुधारी
 - 2. तीर
 - 3. धारदार
 - 4. बोथट

Question Type : MCQ

Question ID : 630680304679

Option 1 ID : 6306801185268

Option 2 ID : 6306801185266

Option 3 ID : 6306801185265

Option 4 ID : 6306801185267

Status : Answered

Chosen Option : 4

Marks : 2

Q.8 पुढीलपैकी भावकर्तरी प्रयोग कोणता आहे?

- Ans
- 1. तो कपात चहा ओततो.
 - 2. भारताने जागतिक प्रश्न सोडवले.
 - 3. आज लवकर उजाडले.
 - 4. तो सकाळीच मैदानावर गेला.

Question Type : MCQ

Question ID : 630680304673

Option 1 ID : 6306801185244

Option 2 ID : 6306801185243

Option 3 ID : 6306801185242

Option 4 ID : 6306801185241

Status : Answered

Chosen Option : 2

Marks : 0

Q.9 पुढीलपैकी कर्मणी प्रयोग कोणता आहे?

- Ans
- 1. सकाळी तो योगासने करतो.
 - 2. आज लवकर उजाडले.
 - 3. नागरिकांनी आपला परिसर स्वच्छ केला.
 - 4. शिक्षकाने मुलांना शिकवले.

Question Type : MCQ

Question ID : 630680304674

Option 1 ID : 6306801185247

Option 2 ID : 6306801185248

Option 3 ID : 6306801185245

Option 4 ID : 6306801185246

Status : Answered

Chosen Option : 1

Marks : 0

Q.10 'आपला तो बाब्या _____' ही म्हण पूर्ण करा.

- Ans
- 1. दुसऱ्याला अपशकुन
 - 2. तरी त्याचा पीळ जात नाही.
 - 3. आपणास दिसत नाही
 - 4. दुसऱ्याचे ते कारटे

Question Type : MCQ

Question ID : 630680304684

Option 1 ID : 6306801185286

Option 2 ID : 6306801185288

Option 3 ID : 6306801185285

Option 4 ID : 6306801185287

Status : Answered

Chosen Option : 4

Marks : 2

Q.11 प्रमाणलेखनानुसार अचूक शब्द कोणता आहे?

- Ans
- 1. विक्षीत
 - 2. वीक्षिप्त
 - 3. विक्षिप्त
 - 4. वीक्षीप्त

Question Type : MCQ

Question ID : 630680304688

Option 1 ID : 6306801185302

Option 2 ID : 6306801185303

Option 3 ID : 6306801185301

Option 4 ID : 6306801185304

Status : Answered

Chosen Option : 1

Marks : 0

Q.12 'राजाच्या स्तुतीची गीते गाणारे' या शब्द समूहाबद्दल एक शब्द शोधा.

- Ans
- 1. भाट
 - 2. गायक
 - 3. वासुदेव
 - 4. कीर्तनकार

Question Type : MCQ

Question ID : 630680304672

Option 1 ID : 6306801185240

Option 2 ID : 6306801185239

Option 3 ID : 6306801185238

Option 4 ID : 6306801185237

Status : Answered

Chosen Option : 1

Marks : 2

Q.13 'जमीन' या शब्दाच्या जोडीने येणारा शब्द शोधा.

- Ans 1. बंगला
 2. किल्ला
 3. नदी
 4. जुमला

Question Type : MCQ
Question ID : 630680304689
Option 1 ID : 6306801185307
Option 2 ID : 6306801185305
Option 3 ID : 6306801185308
Option 4 ID : 6306801185306
Status : Answered
Chosen Option : 4
Marks : 2

Q.14 'अनिवार' या शब्दाचा समानार्थी शब्द शोधा.

- Ans 1. फुलपाखरू
 2. अतिशय
 3. रोपे
 4. हेवा

Question Type : MCQ
Question ID : 630680304675
Option 1 ID : 6306801185251
Option 2 ID : 6306801185250
Option 3 ID : 6306801185252
Option 4 ID : 6306801185249
Status : Answered
Chosen Option : 2
Marks : 2

Q.15 'ज्या गावच्या बोरी त्याच गावच्या बाभळी' या म्हणीचा अर्थ सांगा.

- Ans 1. एकच ठिकाणी असल्याने एकमेकांना ओळखून असणे
 2. बांधकामासाठी झाडांची तोडणी करणे
 3. सावलीसाठी झाडांची लागवड करणे
 4. शेतीसाठी काटेरी कुंपण बांधणे

Question Type : MCQ
Question ID : 630680304682
Option 1 ID : 6306801185280
Option 2 ID : 6306801185277
Option 3 ID : 6306801185278
Option 4 ID : 6306801185279
Status : Answered
Chosen Option : 1
Marks : 2

Q.16 पुढीलपैकी ना. धों. महानोर यांचा कविता संग्रह कोणता?

- Ans 1. एकूण कविता - १
 2. पानझड
 3. बोलावे ते आम्ही
 4. सलाम

Question Type : MCQ

Question ID : 630680304691

Option 1 ID : 6306801185315

Option 2 ID : 6306801185314

Option 3 ID : 6306801185316

Option 4 ID : 6306801185313

Status : Answered

Chosen Option : 3

Marks : 0

Q.17 'नीलकंठ' या सामासिक शब्दाचा योग्य विग्रह करा.

- Ans 1. निळा आहे कंठ ज्याचा असा तो
 2. नीलाचा कंठ
 3. नील आणि कंठ
 4. कंठापासून निळा

Question Type : MCQ

Question ID : 630680304681

Option 1 ID : 6306801185276

Option 2 ID : 6306801185275

Option 3 ID : 6306801185273

Option 4 ID : 6306801185274

Status : Answered

Chosen Option : 1

Marks : 2

Q.18 'फिनिक्सच्या राखेतून उठला मोर' ही जयंत पवार यांची कलाकृती कोणत्या साहित्यप्रकारातील आहे?

- Ans 1. समीक्षा
 2. कथा संग्रह
 3. चरित्र
 4. कविता संग्रह

Question Type : MCQ

Question ID : 630680304692

Option 1 ID : 6306801185319

Option 2 ID : 6306801185318

Option 3 ID : 6306801185320

Option 4 ID : 6306801185317

Status : Answered

Chosen Option : 2

Marks : 2

Q.19 'पाण्यात राहून माशाशी वैर' या म्हणीचा अर्थ सांगा.

- Ans 1. खरी परिस्थिती लपवणे
 2. ज्यांच्या बरोबर राहावे लागते ,त्यांच्याशी शत्रुत्व न करणे.
 3. स्वतः गुन्हा करून दुसऱ्याच्या नावाने ओरडणे.
 4. फार मेहनत करून राहणे

Question Type : MCQ
Question ID : 630680304683
Option 1 ID : 6306801185283
Option 2 ID : 6306801185281
Option 3 ID : 6306801185284
Option 4 ID : 6306801185282
Status : Answered
Chosen Option : 2
Marks : 2

Q.20 'दारुण' या शब्दाचा अर्थ सांगा.

- Ans 1. भयंकर
 2. मजबूत
 3. दार
 4. मदिरा

Question Type : MCQ
Question ID : 630680304671
Option 1 ID : 6306801185234
Option 2 ID : 6306801185236
Option 3 ID : 6306801185235
Option 4 ID : 6306801185233
Status : Answered
Chosen Option : 4
Marks : 0

Q.21 'सामान्य' या शब्दाचा विरुद्धार्थी शब्द शोधा.

- Ans 1. साधारण
 2. अतिसामान्य
 3. साधार
 4. असामान्य

Question Type : MCQ
Question ID : 630680304677
Option 1 ID : 6306801185259
Option 2 ID : 6306801185257
Option 3 ID : 6306801185260
Option 4 ID : 6306801185258
Status : Answered
Chosen Option : 4
Marks : 2

Q.22 'चंचल' या शब्दाचा विरुद्धार्थी शब्द शोधा.

- Ans
- 1. अस्थिर
 - 2. चपळ
 - 3. धाडसी
 - 4. स्थिर

Question Type : MCQ

Question ID : 630680304678

Option 1 ID : 6306801185261

Option 2 ID : 6306801185262

Option 3 ID : 6306801185263

Option 4 ID : 6306801185264

Status : Answered

Chosen Option : 4

Marks : 2

Q.23 'किती लखलखाट झाला विजांचा काल रात्री!' या वाक्याचे विधानार्थी रूपांतर करा.

- Ans
- 1. काल रात्री विजांचा थोडासाच लखलखाट झाला.
 - 2. काल रात्री विजांचा लखलखाट झाला का?
 - 3. काल रात्री विजांचा लखलखाट नाही झाला.
 - 4. काल रात्री विजांचा जोरदार लखलखाट झाला.

Question Type : MCQ

Question ID : 630680304670

Option 1 ID : 6306801185231

Option 2 ID : 6306801185230

Option 3 ID : 6306801185229

Option 4 ID : 6306801185232

Status : Answered

Chosen Option : 4

Marks : 2

Q.24 अचूक वाक्यरचना कोणती आहे ते शोधा.

- Ans
- 1. 'हा भाषेचा आणि विचारांचा हृदयंगम मासला कुठे आढळून येईल का ?'
 - 2. 'हा भाषेचा आणि विचारांचा हृदयंगम मासला कुठे आढळून येईल का ?'
 - 3. 'हा भाषेचा आणि विचारांचा रुदयंगम मासला कुठे आढळून येईल का ?'
 - 4. 'हा भाषेचा आणि विचारांचा हृदयंगम मासला कुठे आढळून येईल का ?'

Question Type : MCQ

Question ID : 630680304668

Option 1 ID : 6306801185224

Option 2 ID : 6306801185221

Option 3 ID : 6306801185222

Option 4 ID : 6306801185223

Status : Answered

Chosen Option : 4

Marks : 2

Q.25 'चौकशी करणे' या अर्थाचा वाक्यप्रचार शोधा.

- Ans 1. चारीमुंड्या चीत होणे
 2. खल करणे
 3. वास्तपुस्त करणे
 4. स्वारस्य असणे

Question Type : MCQ

Question ID : 630680304687

Option 1 ID : 6306801185297

Option 2 ID : 6306801185298

Option 3 ID : 6306801185299

Option 4 ID : 6306801185300

Status : Answered

Chosen Option : 3

Marks : 2

Section : English Language

Q.1 Select the most appropriate article to fill in the blank.

Can you bring me _____ glass of water, please?

- Ans 1. an
 2. the
 3. some
 4. a

Question Type : MCQ

Question ID : 630680252184

Option 1 ID : 630680978717

Option 2 ID : 630680978716

Option 3 ID : 630680978718

Option 4 ID : 630680978715

Status : Answered

Chosen Option : 4

Marks : 2

Q.2 The following sentence has been split into four segments. Identify the segment that contains a grammatical error.

Neil had completed / all eight grades of western music / by the time / he were 17 years old.

- Ans 1. Neil had completed
 2. he were 17 years old
 3. all eight grades of western music
 4. by the time

Question Type : MCQ

Question ID : 630680279732

Option 1 ID : 6306801087187

Option 2 ID : 6306801087190

Option 3 ID : 6306801087188

Option 4 ID : 6306801087189

Status : Answered

Chosen Option : 4

Marks : 0

Q.3 Select the most appropriate synonym of the given word.

Spendthrift

- Ans 1. Prodigal
 2. Altruist
 3. Premature
 4. Rational

Question Type : **MCQ**
Question ID : **630680252275**
Option 1 ID : **630680979080**
Option 2 ID : **630680979081**
Option 3 ID : **630680979079**
Option 4 ID : **630680979082**
Status : **Answered**
Chosen Option : **2**
Marks : **0**

Q.4 Select the most appropriate meaning of the given idiom.

Putting all your eggs in one basket

- Ans 1. Looking for solutions from one single person
 2. Spending wealth on purpose
 3. Depending on a single person or plan of action for success
 4. Taking advantage from some sources

Question Type : **MCQ**
Question ID : **630680274753**
Option 1 ID : **6306801067525**
Option 2 ID : **6306801067523**
Option 3 ID : **6306801067524**
Option 4 ID : **6306801067526**
Status : **Answered**
Chosen Option : **1**
Marks : **0**

Q.5 Select the correctly punctuated sentence from the following options.

- Ans 1. When in Rome do, as the Romans do.
 2. When in Rome do as the Romans, do.
 3. When in Rome, do as the Romans do.
 4. When in, Rome do as the Romans do.

Question Type : **MCQ**
Question ID : **630680274333**
Option 1 ID : **6306801065843**
Option 2 ID : **6306801065846**
Option 3 ID : **6306801065845**
Option 4 ID : **6306801065844**
Status : **Answered**
Chosen Option : **4**
Marks : **0**

Q.6 Parts of the given sentence have been underlined. One of them contains an error. The underlined parts are given as options with some changes. Select the option that correctly rectifies the error.

By the end of the year, he save enough money to buy a car.

- Ans 1. will have saved
 2. Through the end
 3. for the year
 4. On the end

Question Type : MCQ

Question ID : 630680252165

Option 1 ID : 630680978641

Option 2 ID : 630680978642

Option 3 ID : 630680978640

Option 4 ID : 630680978639

Status : Answered

Chosen Option : 1

Marks : 2

Q.7 Select the most appropriate question tag to fill in the blank.

We spent too much time on this useless project yesterday, _____?

- Ans 1. did we
 2. isn't it
 3. didn't we
 4. don't we

Question Type : MCQ

Question ID : 630680252933

Option 1 ID : 630680981711

Option 2 ID : 630680981713

Option 3 ID : 630680981712

Option 4 ID : 630680981714

Status : Answered

Chosen Option : 3

Marks : 2

Q.8 Select the most appropriate option to fill in the blank.

The principal said to me _____

- Ans 1. , "Are you going today?"
 2. "Are you going today?"
 3. "Are you going today?"
 4. , "Are you going today?"

Question Type : MCQ

Question ID : 630680274721

Option 1 ID : 6306801067396

Option 2 ID : 6306801067398

Option 3 ID : 6306801067395

Option 4 ID : 6306801067397

Status : Answered

Chosen Option : 3

Marks : 0

Q.9 Select the most appropriate option to fill in the blank.

He speaks English _____.

- Ans
- 1. sweetly
 - 2. shortly
 - 3. fluently
 - 4. carefully

Question Type : MCQ
Question ID : 630680252278
Option 1 ID : 630680979092
Option 2 ID : 630680979094
Option 3 ID : 630680979093
Option 4 ID : 630680979091
Status : Answered
Chosen Option : 3
Marks : 2

Q.10 Select the option that expresses the given sentence in passive voice.

They had paid a large amount for this flat.

- Ans
- 1. A large amount will have been paid for this flat by them
 - 2. A large amount has been paid for this flat by them.
 - 3. A large amount had been paid for this flat by them.
 - 4. A large amount is paid for this flat by them.

Question Type : MCQ
Question ID : 630680252936
Option 1 ID : 630680981723
Option 2 ID : 630680981726
Option 3 ID : 630680981725
Option 4 ID : 630680981724
Status : Answered
Chosen Option : 3
Marks : 2

Q.11 Select the most appropriate verb to fill in the blank.

Although we are aware of the negative aspects of our system, we ____ everything is alright.

- Ans
- 1. annoy
 - 2. pretend
 - 3. confess
 - 4. suspect

Question Type : MCQ
Question ID : 630680277626
Option 1 ID : 6306801078888
Option 2 ID : 6306801078886
Option 3 ID : 6306801078887
Option 4 ID : 6306801078885
Status : Answered
Chosen Option : 2
Marks : 2

Q.12 Select the option that expresses the given sentence in passive voice.

The referee was giving the goalkeeper a warning stare for his unnecessary shouting throughout the match.

- Ans 1. The goalkeeper had been given a warning stare by the referee for his unnecessary shouting throughout the match
2. The goalkeeper gave a warning stare by the referee for his unnecessary shouting throughout the match
3. The goalkeeper was being given a warning stare by the referee for his unnecessary shouting throughout the match
4. The goalkeeper was given a warning stare by the referee for his unnecessary shouting throughout the match

Question Type : MCQ
Question ID : 630680252194
Option 1 ID : 630680978757
Option 2 ID : 630680978758
Option 3 ID : 630680978756
Option 4 ID : 630680978755
Status : Answered
Chosen Option : 3
Marks : 2

Q.13 Select the most appropriate ANTONYM of the given word.

Cause

- Ans 1. Destroy
2. Reason
3. Create
4. Reaction

Question Type : MCQ
Question ID : 630680252955
Option 1 ID : 630680981799
Option 2 ID : 630680981801
Option 3 ID : 630680981800
Option 4 ID : 630680981802
Status : Answered
Chosen Option : 4
Marks : 0

Q.14 Select the most appropriate adverb to fill in the blank.

The coffee is _____ hot to drink right now.

- Ans 1. enough
 2. too
 3. so
 4. very

Question Type : MCQ
Question ID : 630680252188
Option 1 ID : 630680978731
Option 2 ID : 630680978732
Option 3 ID : 630680978734
Option 4 ID : 630680978733
Status : Answered
Chosen Option : 2
Marks : 2

Q.15 Select the most appropriate option to fill in the blank.

My younger brother is a _____ young man. He was deceived many times.

- Ans 1. astute
 2. valorous
 3. stout
 4. gullible

Question Type : MCQ
Question ID : 630680252240
Option 1 ID : 630680978941
Option 2 ID : 630680978940
Option 3 ID : 630680978942
Option 4 ID : 630680978939
Status : Answered
Chosen Option : 2
Marks : 0

Q.16 Select the INCORRECTLY spelt word in the following sentence.

Our voyage last year was a prosperuos and successful one, as I learnt a lot of things there

- Ans 1. prosperuos
 2. voyage
 3. successful
 4. learnt

Question Type : MCQ
Question ID : 630680252249
Option 1 ID : 630680978976
Option 2 ID : 630680978975
Option 3 ID : 630680978977
Option 4 ID : 630680978978
Status : Answered
Chosen Option : 1
Marks : 2

Q.17 Select the most appropriate option to fill in the blank.

Revathi enjoyed the sun which was slowly setting behind the horizon and casting a warm golden glow across _____ ocean.

- Ans
- 1. since
 - 2. a
 - 3. an
 - 4. the

Question Type : MCQ
Question ID : 630680252201
Option 1 ID : 630680978786
Option 2 ID : 630680978785
Option 3 ID : 630680978784
Option 4 ID : 630680978783
Status : Answered
Chosen Option : 4
Marks : 2

Q.18 Select the INCORRECTLY spelt word.

- Ans
- 1. Entrepreneurial
 - 2. Perseavarence
 - 3. Exaggeration
 - 4. Conscientious

Question Type : MCQ
Question ID : 630680252207
Option 1 ID : 630680978808
Option 2 ID : 630680978809
Option 3 ID : 630680978810
Option 4 ID : 630680978807
Status : Answered
Chosen Option : 4
Marks : 0

Q.19 Select the most appropriate option to fill in the blank.

Chennai is _____ from Delhi than from Hyderabad.

- Ans
- 1. far
 - 2. farther
 - 3. farthest
 - 4. further

Question Type : MCQ
Question ID : 630680252277
Option 1 ID : 630680979088
Option 2 ID : 630680979087
Option 3 ID : 630680979090
Option 4 ID : 630680979089
Status : Answered
Chosen Option : 2
Marks : 2

Q.20 Select the most appropriate option to fill in the blank.

_____ people can read and write proper English in my town.

- Ans
- 1. Less
 - 2. Much
 - 3. A few
 - 4. The few

Question Type : MCQ
Question ID : 630680252958
Option 1 ID : 630680981811
Option 2 ID : 630680981814
Option 3 ID : 630680981812
Option 4 ID : 630680981813
Status : Answered
Chosen Option : 3
Marks : 2

Q.21 Select the most appropriate meaning of the given proverb.

Don't count your chickens before they are hatched.

- Ans
- 1. Don't do something which causes your own downfall.
 - 2. Don't complain if you can't enforce your point.
 - 3. Don't blame the tools for your bad workmanship.
 - 4. Don't depend on something happening before it has happened.

Question Type : MCQ
Question ID : 630680277632
Option 1 ID : 6306801078909
Option 2 ID : 6306801078910
Option 3 ID : 6306801078911
Option 4 ID : 6306801078912
Status : Answered
Chosen Option : 4
Marks : 2

Q.22 Select the most appropriate meaning of the underlined idiom.

She didn't commit a crime. For her silly mistake, she can get a slap on the wrist.

- Ans
- 1. Reveal the secret
 - 2. Be free from all obligations
 - 3. Start a new journey
 - 4. Get a small punishment

Question Type : MCQ
Question ID : 630680252947
Option 1 ID : 630680981770
Option 2 ID : 630680981768
Option 3 ID : 630680981767
Option 4 ID : 630680981769
Status : Answered
Chosen Option : 4
Marks : 2

Q.23 Select the most appropriate question tag to fill in the blank.

Vishnu is from Delhi, _____?

- Ans 1. isn't he?
 2. is he?
 3. did he?
 4. didn't he?

Question Type : MCQ
Question ID : 630680274335
Option 1 ID : 6306801065851
Option 2 ID : 6306801065852
Option 3 ID : 6306801065854
Option 4 ID : 6306801065853
Status : Answered
Chosen Option : 1
Marks : 2

Q.24 Select the most appropriate synonym of the given word.

Concise

- Ans 1. Brief
 2. Shortened
 3. Abbreviated
 4. Flashy

Question Type : MCQ
Question ID : 630680252273
Option 1 ID : 630680979074
Option 2 ID : 630680979073
Option 3 ID : 630680979072
Option 4 ID : 630680979071
Status : Answered
Chosen Option : 2
Marks : 0

Q.25 Select the most appropriate option to fill in the blank.

The flowers _____ brightly, adding colour to the garden landscape.

- Ans 1. are bloomed
 2. is blooming
 3. bloom
 4. will have blooming

Question Type : MCQ
Question ID : 630680252167
Option 1 ID : 630680978647
Option 2 ID : 630680978650
Option 3 ID : 630680978649
Option 4 ID : 630680978648
Status : Answered
Chosen Option : 2
Marks : 0

Q.1 Which of the following statements is/are correct?

- A) Raja Ram Mohan Roy founded a religious society called Brahma Sabha, later known as the Brahma Samaj.
B) The Brahma Samaj laid emphasis on human dignity, opposed idolatry and criticised social evils such as the practice of Sati.

- Ans 1. Neither A nor B
 2. Only B
 3. Both A and B
 4. Only A

Question Type : MCQ

Question ID : 630680275297

Option 1 ID : 6306801069702

Option 2 ID : 6306801069700

Option 3 ID : 6306801069701

Option 4 ID : 6306801069699

Status : Answered

Chosen Option : 3

Marks : 2

Q.2 Which of the following has been given the power to remove difficulties if any difficulty arises in giving the effect to the provisions of the Right to Information Act, 2005?

- Ans 1. Union Public Service Commission
 2. State Governments
 3. Central Government
 4. Supreme Court of India

Question Type : MCQ

Question ID : 630680275373

Option 1 ID : 6306801070006

Option 2 ID : 6306801070004

Option 3 ID : 6306801070005

Option 4 ID : 6306801070003

Status : Answered

Chosen Option : 3

Marks : 2

Q.3 How does water get absorbed into the trees?

- Ans 1. Roots
 2. Wind speed
 3. Temperature
 4. Sunlight

Question Type : MCQ

Question ID : 630680270230

Option 1 ID : 6306801050174

Option 2 ID : 6306801050172

Option 3 ID : 6306801050173

Option 4 ID : 6306801050171

Status : Answered

Chosen Option : 1

Marks : 2

Q.4 As per the 2011 census, which state in India had the highest gap between male and female literacy rates?

- Ans 1. Haryana
 2. Rajasthan
 3. Kerala
 4. West Bengal

Question Type : MCQ
Question ID : 630680270565
Option 1 ID : 6306801051449
Option 2 ID : 6306801051447
Option 3 ID : 6306801051448
Option 4 ID : 6306801051446
Status : Answered
Chosen Option : 2
Marks : 2

Q.5 In which of the following years had Bankim Chandra Chattopadhyay written Anandmath?

- Ans 1. 1820
 2. 1824
 3. 1825
 4. 1882

Question Type : MCQ
Question ID : 630680275922
Option 1 ID : 6306801072199
Option 2 ID : 6306801072200
Option 3 ID : 6306801072201
Option 4 ID : 6306801072202
Status : Answered
Chosen Option : 2
Marks : 0

Q.6 Which of the following State Assemblies has passed the Lokayukta Bill 2022, in December 2022 which brings the CM and the council of ministers under the ambit of the anti-corruption ombudsman?

- Ans 1. Maharashtra
 2. Karnataka
 3. Odisha
 4. West Bengal

Question Type : MCQ
Question ID : 630680275529
Option 1 ID : 6306801070627
Option 2 ID : 6306801070630
Option 3 ID : 6306801070629
Option 4 ID : 6306801070628
Status : Answered
Chosen Option : 2
Marks : 0

Q.7 What is the name of the loan scheme for the social and economic development of women through loans, launched by the Rajasthan Government in August 2022 for women entrepreneurs on the occasion of Women's Equality Day?

- Ans 1. Mahila Nidhi
 2. Mahila Swanidhi
 3. Mahila Swadhar
 4. Mahila Swabhiman

Question Type : MCQ
Question ID : 630680275550
Option 1 ID : 6306801070711
Option 2 ID : 6306801070713
Option 3 ID : 6306801070712
Option 4 ID : 6306801070714
Status : Answered
Chosen Option : 3
Marks : 0

Q.8 To which group does the spider specifically belong?

- Ans 1. Annelida
 2. Arthropoda
 3. Mollusca
 4. Nematoda

Question Type : MCQ
Question ID : 630680270202
Option 1 ID : 6306801050061
Option 2 ID : 6306801050060
Option 3 ID : 6306801050062
Option 4 ID : 6306801050059
Status : Answered
Chosen Option : 2
Marks : 2

Q.9 Which of the following states has successfully implemented the concept of Bio-Village in order to mitigate Climate Change in 2022?

- Ans 1. Tripura
 2. Meghalaya
 3. Manipur
 4. Assam

Question Type : MCQ
Question ID : 630680275500
Option 1 ID : 6306801070511
Option 2 ID : 6306801070512
Option 3 ID : 6306801070514
Option 4 ID : 6306801070513
Status : Answered
Chosen Option : 4
Marks : 0

Q.10 Which of the following books has been conceived and curated by Boria Majumdar in April 2023?

- Ans
- 1. Sachin Tendulkar: Playing it My Way
 - 2. Sachin Tendulkar: Chase Your Dream
 - 3. Crosscourt
 - 4. Sachin@50: Celebrating A Maestro

Question Type : MCQ
Question ID : 630680270577
Option 1 ID : 6306801051496
Option 2 ID : 6306801051495
Option 3 ID : 6306801051497
Option 4 ID : 6306801051494
Status : Answered
Chosen Option : 4
Marks : 2

Q.11 Which type of vegetation is found in the Sundarbans?

- Ans
- 1. Desert shrublands
 - 2. Temperate rainforests
 - 3. Mangrove forests
 - 4. Alpine meadows

Question Type : MCQ
Question ID : 630680270181
Option 1 ID : 6306801049978
Option 2 ID : 6306801049977
Option 3 ID : 6306801049976
Option 4 ID : 6306801049975
Status : Answered
Chosen Option : 3
Marks : 2

Q.12 What is the name of the month-long campaign launched against Gender-Based Discrimination and Violence, inaugurated by Union Minister for Rural Development Giriraj Singh in 2022?

- Ans
- 1. Nai Roshni
 - 2. Nai Chetna-Pahal Badlav Ki
 - 3. Nai chetna- Nai Umeed
 - 4. Nai Ummed- Badlav ki aur

Question Type : MCQ
Question ID : 630680275574
Option 1 ID : 6306801070807
Option 2 ID : 6306801070808
Option 3 ID : 6306801070810
Option 4 ID : 6306801070809
Status : Answered
Chosen Option : 2
Marks : 2

Q.13 Which of the following Articles mentions about two types of amendments of the Indian Constitution?

- Ans 1. Article 238
 2. Article 123
 3. Article 368
 4. Article 268

Question Type : MCQ
Question ID : 630680270470
Option 1 ID : 6306801051067
Option 2 ID : 6306801051066
Option 3 ID : 6306801051069
Option 4 ID : 6306801051068
Status : Answered
Chosen Option : 3
Marks : 2

Q.14 Name the Freedom Fighter who was famous by the nickname 'Grand Old Man of India.'

- Ans 1. Surendra Nath Banerjee
 2. Gopal Krishan Gokhale
 3. Mahatma Gandhi
 4. Dada Bhai Naoroji

Question Type : MCQ
Question ID : 630680275921
Option 1 ID : 6306801072197
Option 2 ID : 6306801072196
Option 3 ID : 6306801072195
Option 4 ID : 6306801072198
Status : Answered
Chosen Option : 4
Marks : 2

Q.15 In order to protect sericulturists from the effects of climate change, water scarcity, and other dangers which of the following states has launched the country's first 'Resham Keet Bima' programme?

- Ans 1. Himachal Pradesh
 2. Kashmir
 3. Uttarakhand
 4. Ladakh

Question Type : MCQ
Question ID : 630680275502
Option 1 ID : 6306801070520
Option 2 ID : 6306801070522
Option 3 ID : 6306801070521
Option 4 ID : 6306801070519
Status : Answered
Chosen Option : 3
Marks : 2

Q.16 Who among the following social reformers has written the book titled 'Gulamgiri'?

Ans 1. Vishnubawa Brahmachari

2. Jyotiba Phule

3. Phirozshah Mehta

4. Behramji Malabari

Question Type : MCQ

Question ID : 630680275311

Option 1 ID : 6306801069756

Option 2 ID : 6306801069755

Option 3 ID : 6306801069757

Option 4 ID : 6306801069758

Status : Answered

Chosen Option : 2

Marks : 2

Q.17 Which state in India has the highest concentration of Jews?

Ans 1. Arunachal Pradesh

2. Maharashtra

3. Sikkim

4. Mizoram

Question Type : MCQ

Question ID : 630680270569

Option 1 ID : 6306801051465

Option 2 ID : 6306801051463

Option 3 ID : 6306801051464

Option 4 ID : 6306801051462

Status : Answered

Chosen Option : 2

Marks : 2

Q.18 What does the principle of 'Universal adult franchise' refer to?

Ans 1. Ensuring that every citizen has right to speech

2. Ensuring that all the adult citizens have the right to vote

3. Ensuring that all the citizens can buy property

4. Ensuring that all the citizens get government jobs

Question Type : MCQ

Question ID : 630680276502

Option 1 ID : 6306801074503

Option 2 ID : 6306801074506

Option 3 ID : 6306801074505

Option 4 ID : 6306801074504

Status : Answered

Chosen Option : 2

Marks : 2

Q.19 Which of the following cities has won the award for 'World Green City 2022' award in the category of 'Living Green for Economic Recovery and Inclusive Growth' at the International Association of Horticulture Producers (AIPH) World Green City Awards 2022 held in Jeju, South Korea?

- Ans 1. Mumbai
 2. Hyderabad
 3. Mysuru
 4. Bengaluru

Question Type : MCQ
Question ID : 630680275495
Option 1 ID : 6306801070491
Option 2 ID : 6306801070493
Option 3 ID : 6306801070494
Option 4 ID : 6306801070492
Status : Answered
Chosen Option : 2
Marks : 2

Q.20 Identify the INCORRECT match from the options provided.

- Ans 1. Lamina: The flat green portion of a leaf
 2. Petiole: Connects the leaf to the stem
 3. Veins: Transpiration
 4. Margin: Gives shape to the leaf

Question Type : MCQ
Question ID : 630680270234
Option 1 ID : 6306801050189
Option 2 ID : 6306801050190
Option 3 ID : 6306801050187
Option 4 ID : 6306801050188
Status : Answered
Chosen Option : 3
Marks : 2

Q.21 Which of the following Citizenship Amendment Acts replaced the nomenclature of 'Overseas Citizen of India' with that of 'Overseas Citizen of India Cardholder' and made some provisions in the Principal Act?

- Ans 1. Citizenship (Amendment) Act, 2005
 2. Citizenship (Amendment) Act, 1985
 3. Citizenship (Amendment) Act, 1986
 4. Citizenship (Amendment) Act, 2015

Question Type : MCQ
Question ID : 630680276506
Option 1 ID : 6306801074521
Option 2 ID : 6306801074519
Option 3 ID : 6306801074520
Option 4 ID : 6306801074522
Status : Answered
Chosen Option : 1
Marks : 0

Q.22 Which Section of the Right to Information Act, 2005, mentions about 'Laying of rules'?

- Ans 1. Section 30
 2. Section 28
 3. Section 31
 4. Section 29

Question Type : MCQ
Question ID : 630680275358
Option 1 ID : 6306801069945
Option 2 ID : 6306801069943
Option 3 ID : 6306801069946
Option 4 ID : 6306801069944
Status : Answered
Chosen Option : 2
Marks : 0

Q.23 In which year did Gopal Krishna Gokhale found the 'Servants of India Society'?

- Ans 1. 1907
 2. 1910
 3. 1901
 4. 1905

Question Type : MCQ
Question ID : 630680275322
Option 1 ID : 6306801069801
Option 2 ID : 6306801069802
Option 3 ID : 6306801069799
Option 4 ID : 6306801069800
Status : Answered
Chosen Option : 4
Marks : 2

Q.24 Formulas in Excel start with _____.

- Ans 1. f
 2. -
 3. /
 4. =

Question Type : MCQ
Question ID : 630680275760
Option 1 ID : 6306801071552
Option 2 ID : 6306801071553
Option 3 ID : 6306801071551
Option 4 ID : 6306801071554
Status : Answered
Chosen Option : 1
Marks : 0

Q.25 Baba Saheb Ambedkar was born on _____.

- Ans 1. 14 April 1891
 2. 18 May 1891
 3. 21 June 1891
 4. 27 July 1891

Question Type : MCQ
Question ID : 630680275280
Option 1 ID : 6306801069631
Option 2 ID : 6306801069632
Option 3 ID : 6306801069633
Option 4 ID : 6306801069634
Status : Answered
Chosen Option : 1
Marks : 2

Section : General Intelligence

Q.1 A man had 0.08 part of his wealth invested in stocks, 0.3 part in FDs, 0.4 part amounting to ₹2,400 as gold, and the rest in cash. How much total cash and stocks did he have?

- Ans 1. ₹1,600
 2. ₹1,500
 3. ₹2,000
 4. ₹1,800

Question Type : MCQ
Question ID : 630680287287
Option 1 ID : 6306801117055
Option 2 ID : 6306801117058
Option 3 ID : 6306801117057
Option 4 ID : 6306801117056
Status : Answered
Chosen Option : 1
Marks : 0

Q.2 Oranges are bought at 100 for ₹80 and all of them are sold at 80 for ₹100. Find the loss or gain percentage in this transaction.

- Ans 1. 56.25% profit
 2. 22.22% loss
 3. 36.36% loss
 4. 44.44% profit

Question Type : MCQ
Question ID : 630680287333
Option 1 ID : 6306801117242
Option 2 ID : 6306801117241
Option 3 ID : 6306801117240
Option 4 ID : 6306801117239
Status : Answered
Chosen Option : 3
Marks : 0

Q.3 Four word-pairs have been given, out of which three are alike in some manner and one is different. Select the one that is different.

- Ans 1. Flowers – Bouquet
 2. Tree – Bushel
 3. Grapes – Bunch
 4. Plums – Basket

Question Type : MCQ
Question ID : 630680278572
Option 1 ID : 6306801082575
Option 2 ID : 6306801082576
Option 3 ID : 6306801082574
Option 4 ID : 6306801082573
Status : Answered
Chosen Option : 4
Marks : 0

Q.4 What should come in place of the question mark (?) in the given series?
24, 33, 58, 107, 188, ?

- Ans 1. 304
 2. 317
 3. 309
 4. 321

Question Type : MCQ
Question ID : 630680276791
Option 1 ID : 6306801075659
Option 2 ID : 6306801075661
Option 3 ID : 6306801075662
Option 4 ID : 6306801075660
Status : Answered
Chosen Option : 3
Marks : 2

Q.5 Which of the following alpha-numeric terms will replace the question mark (?) in the given series to make it logically complete?

QJ7, UF15, YB23, ?

- Ans 1. XC31
 2. CX37
 3. XC37
 4. CX31

Question Type : MCQ
Question ID : 630680287237
Option 1 ID : 6306801116857
Option 2 ID : 6306801116856
Option 3 ID : 6306801116855
Option 4 ID : 6306801116858
Status : Answered
Chosen Option : 1
Marks : 0

Q.6 The cost of a machine is estimated to be decreasing at the rate of 15% every year. If it costs ₹6,000 now, what will be the estimated value of the machine after 2 years?

- Ans
- 1. ₹3,750
 - 2. ₹3,225
 - 3. ₹4,335
 - 4. ₹5,000

Question Type : MCQ

Question ID : 630680287996

Option 1 ID : 6306801119891

Option 2 ID : 6306801119893

Option 3 ID : 6306801119892

Option 4 ID : 6306801119894

Status : Answered

Chosen Option : 3

Marks : 2

Q.7 A bike travels the first one-third of a certain distance with a speed of 10 km/h, the next one-third distance with a speed of 20 km/h, and the last one-third distance with a speed of 60 km/h. What is the average speed of the bike for the whole journey?

- Ans
- 1. 36 km/h
 - 2. 24 km/h
 - 3. 18 km/h
 - 4. 30 km/h

Question Type : MCQ

Question ID : 630680288013

Option 1 ID : 6306801119959

Option 2 ID : 6306801119961

Option 3 ID : 6306801119962

Option 4 ID : 6306801119960

Status : Answered

Chosen Option : 4

Marks : 0

Q.8 If 'A' stands for '÷', 'B' stands for '×', 'D' stands for '+' and 'C' stands for '-', then the resultant of which of the following would be 20?

- Ans
- 1. 100 B 50 A 30 C 40 D 80
 - 2. 100 A 50 B 30 D 40 C 80
 - 3. 100 B 50 A 30 D 40 C 80
 - 4. 100 A 50 B 30 C 40 D 80

Question Type : MCQ

Question ID : 630680273684

Option 1 ID : 6306801063255

Option 2 ID : 6306801063256

Option 3 ID : 6306801063257





Option 4 ID : 6306801063258

Status : Answered

Chosen Option : 2

Marks : 2

Q.9 In the following triad, each group of letters is related to the subsequent one following a certain logic. Select from the given options, the one that follows the same logic.
FAIR – AIRF – IAFR

- Ans  1. BUSY – SUYB – SBUY
 2. UPON – OPNU – OUPN
 3. HOLD – OLDH – LOHD
 4. EACH – CHAE – HAEC

Question Type : **MCQ**

Question ID : **630680276631**

Option 1 ID : **6306801075019**

Option 2 ID : **6306801075020**

Option 3 ID : **6306801075021**

Option 4 ID : **6306801075022**

Status : **Answered**

Chosen Option : **3**

Marks : **2**

Q.10 Simplify $2 \times 6 \div 3 + 9 \times 4 - 6 \div 2$.

- Ans  1. 14
 2. 41
 3. 17
 4. 37

Question Type : **MCQ**

Question ID : **630680287274**

Option 1 ID : **6306801117006**

Option 2 ID : **6306801117003**

Option 3 ID : **6306801117005**

Option 4 ID : **6306801117004**

Status : **Answered**

Chosen Option : **4**

Marks : **2**

Q.11 If a fraction's denominator is decreased by 80%, and the numerator is increased by 300%, the fraction becomes $\frac{2}{9}$. What is the fraction ?

Ans

1. $\frac{6}{45}$

2. $\frac{6}{72}$

3. $\frac{8}{9}$

4. $\frac{1}{90}$

Question Type : MCQ

Question ID : 630680287290

Option 1 ID : 6306801117068

Option 2 ID : 6306801117070

Option 3 ID : 6306801117067

Option 4 ID : 6306801117069

Status : Answered

Chosen Option : 4

Marks : 2

Q.12 The average weight of A, B and C is 45 kg. If the average weight of A and B is 40 kg, and that of B and C is 43 kg, then the weight of B is:

Ans 1. 26 kg

2. 31 kg

3. 23 kg

4. 19 kg

Question Type : MCQ

Question ID : 630680287310

Option 1 ID : 6306801117149

Option 2 ID : 6306801117150

Option 3 ID : 6306801117148

Option 4 ID : 6306801117147

Status : Answered

Chosen Option : 2

Marks : 2

Q.13 Read the given statements and conclusions carefully. You have to take the given statements to be true even if they seem to be at variance from commonly known facts. You have to decide which conclusion/s logically follow/s and is/are true based on the given statements.
Statements: Some crows are kites. All kites are eagles. All crows are eagles.

Conclusions:

(I) No kites are crows.

(II) Some eagles are not crows.

- Ans** 1. Neither conclusion (I) nor (II) is true.
 2. Only conclusion (II) is true.
 3. Both conclusions (I) and (II) are true.
 4. Only conclusion (I) is true.

Question Type : **MCQ**

Question ID : **630680278494**

Option 1 ID : **6306801082263**

Option 2 ID : **6306801082262**

Option 3 ID : **6306801082264**

Option 4 ID : **6306801082261**

Status : **Answered**

Chosen Option : **2**

Marks : **2**

Q.14 Four letter-clusters have been given, out of which three are alike in some manner and one is different. Select the one that is different.

- Ans** 1. ORU
 2. MPS
 3. HKM
 4. FIL

Question Type : **MCQ**

Question ID : **630680273650**

Option 1 ID : **6306801063120**

Option 2 ID : **6306801063121**

Option 3 ID : **6306801063119**

Option 4 ID : **6306801063122**

Status : **Answered**

Chosen Option : **3**

Marks : **2**

Q.15 Find the profit or loss percentage, if the cost price of 8 articles, all of the same kind, is equal to selling price of 10 articles.

- Ans
- 1. 22.22% profit
 - 2. 17.5% loss
 - 3. 25% profit
 - 4. 20% loss

Question Type : MCQ
Question ID : 630680287329
Option 1 ID : 6306801117223
Option 2 ID : 6306801117225
Option 3 ID : 6306801117224
Option 4 ID : 6306801117226
Status : Answered
Chosen Option : 4
Marks : 2

Q.16 A woman invested ₹85,000 at the rate of $7\frac{1}{2}\%$ per annum simple interest for 4 years. Find the amount she will receive after 4 years.

- Ans
- 1. ₹1,10,500
 - 2. ₹69,600
 - 3. ₹1,08,750
 - 4. ₹75,000

Question Type : MCQ
Question ID : 630680287984
Option 1 ID : 6306801119846
Option 2 ID : 6306801119843
Option 3 ID : 6306801119844
Option 4 ID : 6306801119845
Status : Answered
Chosen Option : 1
Marks : 2

Q.17 What should come in place of the question mark (?) in the given series in order to make it logically complete?
J130I, S146B, ?, K207N, T256G

- Ans
- 1. A171V
 - 2. A171U
 - 3. B171U
 - 4. B171V

Question Type : MCQ
Question ID : 630680276914
Option 1 ID : 6306801076151
Option 2 ID : 6306801076153
Option 3 ID : 6306801076152
Option 4 ID : 6306801076154
Status : Answered
Chosen Option : 2
Marks : 0

Q.18 MRXN is related to PTUL in a certain way based on the English alphabetical order. In the same way, IVQS is related to LXNQ. To which of the following is HNSZ related following the same logic?

- Ans 1. LQPY
 2. KPPX
 3. LPRV
 4. KPQW

Question Type : MCQ
Question ID : 630680278564
Option 1 ID : 6306801082543
Option 2 ID : 6306801082541
Option 3 ID : 6306801082544
Option 4 ID : 6306801082542
Status : Answered
Chosen Option : 2
Marks : 2

Q.19 खालील अक्षर मालिकेचा संदर्भ घ्या आणि प्रश्नाचे उत्तर द्या.
(डावे) J T B S P T Q L T J D C T (उजवे)
दिलेल्या मालिकेत अशी किती अक्षरे आहेत, ज्यांच्या ताबडतोब नंतर 'T' येतो?

- Ans 1. 2
 2. 1
 3. 3
 4. 4

Question Type : MCQ
Question ID : 630680280692
Option 1 ID : 6306801091004
Option 2 ID : 6306801091006
Option 3 ID : 6306801091005
Option 4 ID : 6306801091003
Status : Answered
Chosen Option : 4
Marks : 2

Q.20 What should come in place of the question mark (?) in the given series in order to make it logically complete?
D9L, L16P, T25T, B36X, ?

- Ans 1. I48B
 2. J49B
 3. I49B
 4. J48B

Question Type : MCQ
Question ID : 630680276916
Option 1 ID : 6306801076159
Option 2 ID : 6306801076160
Option 3 ID : 6306801076161
Option 4 ID : 6306801076162
Status : Answered
Chosen Option : 2
Marks : 2

Q.21 Ansh and Tanvi can do a piece of work in 24 days and 40 days respectively. They started the work and after 8 days, Shubham who can complete the same work in 20 days joined them. In how many days can they complete the whole work?

- Ans 1. 15
 2. 20
 3. 16
 4. 12

Question Type : MCQ

Question ID : 630680288036

Option 1 ID : 6306801120052

Option 2 ID : 6306801120054

Option 3 ID : 6306801120053

Option 4 ID : 6306801120051

Status : Answered

Chosen Option : 4

Marks : 2

Q.22 A man is swimming in a stream which flows at the rate of 1.5 km/h. In a given time he can swim twice the distance with the stream as compared to the distance he can swim against it. Find the speed of the man.

- Ans 1. 5.5 km/h
 2. 4.5 km/h
 3. 9.5 km/h
 4. 7.5 km/h

Question Type : MCQ

Question ID : 630680288025

Option 1 ID : 6306801120009

Option 2 ID : 6306801120010

Option 3 ID : 6306801120008

Option 4 ID : 6306801120007

Status : Answered

Chosen Option : 2

Marks : 2

Q.23 Read the given statement(s) and conclusions carefully. Assuming that the information given in the statements is true even if it appears to be at variance with commonly known facts, decide which of the given conclusions logically follow(s) from the statement(s).

Statements: Some sketch pens are pencils. All pencils are bar.

Conclusions:

(I): Some bars are sketch pens.

(II): Some sketch pens are bar.

- Ans** 1. Both conclusions (I) and (II) follow.
 2. Neither conclusion (I) nor conclusion (II) follow.
 3. Only conclusion (I) follows.
 4. Only conclusion (II) follows.

Question Type : **MCQ**

Question ID : **630680273935**

Option 1 ID : **6306801064262**

Option 2 ID : **6306801064261**

Option 3 ID : **6306801064259**

Option 4 ID : **6306801064260**

Status : **Answered**

Chosen Option : 1

Marks : 2

Q.24 Pipes A and B can fill a tank in 8 hours and 10 hours, respectively, and pipe C can empty the full tank in 12 hours. All three pipes are opened together, but pipe A is closed after 4 hours. In how many hours will the remaining part of the tank be filled?

- Ans** 1. 26
 2. 24
 3. 30
 4. 22

Question Type : **MCQ**

Question ID : **630680288052**

Option 1 ID : **6306801120117**

Option 2 ID : **6306801120116**

Option 3 ID : **6306801120118**

Option 4 ID : **6306801120115**

Status : **Answered**

Chosen Option : 1

Marks : 2

Q.25 What should come in place of the question mark (?) in the given series?
641, 538, 447, 368, 301, ?

Ans  1. 264

 2. 241

 3. 246

 4. 257

Question Type : MCQ

Question ID : 630680276815

Option 1 ID : 6306801075755

Option 2 ID : 6306801075757

Option 3 ID : 6306801075758

Option 4 ID : 6306801075756

Status : Answered

Chosen Option : 3

Marks : 2