



2014

CODE : DO4

प्रश्नपुस्तिका क्रमांक

BOOKLET NO.

प्रश्नपुस्तिका

एकूण प्रश्न : 100

वेळ : 1 (एक) तास

मराठी, इंग्रजी व सामान्य अध्ययन

एकूण गुण : 100

सूचना

- (1) सदर प्रश्नपुस्तिकेत 100 अनिवार्य प्रश्न आहेत. उमेदवारांनी प्रश्नांची उत्तरे लिहिण्यास सुरुवात करण्यापूर्वी या प्रश्नपुस्तिकेत सर्व प्रश्न आहेत किंवा नाहीत याची खात्री करून घ्यावी. असा तसेच अन्य काही दोष आढळल्यास ही प्रश्नपुस्तिका समवेक्षकांकडून लगेच बदलून घ्यावी.

परीक्षा-क्रमांक									

↑ केंद्राची संकेताक्षरे

↑ शेवटचा अंक

- (2) आपला परीक्षा-क्रमांक ह्या चौकोनांत न विसरता बॉलपेनने लिहावा.
- (3) वर छापलेला प्रश्नपुस्तिका क्रमांक तुमच्या उत्तरपत्रिकेवर विशिष्ट जागी उत्तरपत्रिकेवरील सूचनेप्रमाणे न विसरता नमूद करावा.
- (4) (अ) या प्रश्नपुस्तिकेतील प्रत्येक प्रश्नाला 4 पर्यायी उत्तरे सुचविली असून त्यांना 1, 2, 3 आणि 4 असे क्रमांक दिलेले आहेत. त्या चार उत्तरपैकी सर्वांत योग्य उत्तराचा क्रमांक उत्तरपत्रिकेवरील सूचनेप्रमाणे तुमच्या उत्तरपत्रिकेवर नमूद करावा. अशा प्रकारे उत्तरपत्रिकेवर उत्तरक्रमांक नमूद करताना तो संबंधित प्रश्नक्रमांकासमोर छायांकित करून दर्शविले जाईल याची काळजी घ्यावी. ह्याकरिता फक्त काळ्या शाईचे बॉलपेन वापरावे, पेन्सिल वा शाईचे पेन वापरू नये.
- (ब) आयोगाने ज्या विषयासाठी मराठी बरोबर इंग्रजी माध्यम विहित केलेले आहे. त्या विषयाचा प्रत्येक प्रश्न मराठी बरोबर इंग्रजी भाषेत देखील छापण्यात आला आहे. त्यामधील इंग्रजीतील किंवा मराठीतील प्रश्नामध्ये मुद्रणदोषांमुळे अथवा अन्य कारणांमुळे विसंगती निर्माण झाल्याची शंका आल्यास, उमेदवाराने संबंधित प्रश्न पर्यायी भाषेतील प्रश्नाशी ताडून पहावा.
- (5) सर्व प्रश्नांना समान गुण आहेत. यास्तव सर्व प्रश्नांची उत्तरे द्यावीत. घाईमुळे चुका होणार नाहीत याची दक्षता घेऊनच शक्य तितक्या वेगाने प्रश्न सोडवावेत. क्रमाने प्रश्न सोडविणे श्रेयस्कर आहे पण एखादा प्रश्न कठीण वाटल्यास त्यावर वेळ न घालविता पुढील प्रश्नाकडे वळावे. अशा प्रकारे शेवटच्या प्रश्नापर्यंत पोहोचल्यानंतर वेळ शिल्लक राहिल्यास कठीण म्हणून वगळलेल्या प्रश्नांकडे परतणे सोईस्कर ठरेल.
- (6) उत्तरपत्रिकेत एकदा नमूद केलेले उत्तर खोडता येणार नाही. नमूद केलेले उत्तर खोडून नव्याने उत्तर दिल्यास ते तपासले जाणार नाही.
- (7) प्रस्तुत परीक्षेच्या उत्तरपत्रिकांचे मूल्यांकन करताना उमेदवाराच्या उत्तरपत्रिकेतील योग्य उत्तरांनाच गुण दिले जातील. तसेच "उमेदवाराने वस्तुनिष्ठ बहुपर्यायी स्वरूपाच्या प्रश्नांची दिलेल्या चार उत्तरपैकी सर्वांत योग्य उत्तरेच उत्तरपत्रिकेत नमूद करावीत. अन्यथा त्यांच्या उत्तरपत्रिकेत सोडविलेल्या प्रत्येक चार चुकीच्या उत्तरांसाठी एका प्रश्नाचे गुण वजा करण्यात येतील".

ताकीद

ह्या प्रश्नपत्रिकेसाठी आयोगाने विहित केलेली वेळ संपेपर्यंत ही प्रश्नपुस्तिका आयोगाची मालमत्ता असून ती परीक्षाकक्षात उमेदवाराला परीक्षेसाठी वापरण्यास देण्यात येत आहे. ही वेळ संपेपर्यंत सदर प्रश्नपुस्तिकेची प्रत/प्रती, किंवा सदर प्रश्नपुस्तिकेतील काही आशय कोणत्याही स्वरूपात प्रत्यक्ष वा अप्रत्यक्षपणे कोणत्याही व्यक्तीस पुरविणे, तसेच प्रसिद्ध करणे हा गुन्हा असून अशी कृती करणाऱ्या व्यक्तीवर शासनाने जारी केलेल्या "परीक्षांमध्ये होणाऱ्या गैरप्रकारांना प्रतिबंध करण्याबाबतचा अधिनियम-82" यातील तरतुदीनुसार तसेच प्रचलित कायद्याच्या तरतुदीनुसार कारवाई करण्यात येईल व दोषी व्यक्ती कमाल एक वर्षाच्या कारावासाच्या आणि/किंवा रुपये एक हजार रकमेच्या दंडाच्या शिक्षेस पात्र होईल.

तसेच ह्या प्रश्नपत्रिकेसाठी विहित केलेली वेळ संपण्याआधी ही प्रश्नपुस्तिका अनधिकृतपणे बाळगणे हा सुद्धा गुन्हा असून तसे करणारी व्यक्ती आयोगाच्या कर्मचारीवृंदापैकी, तसेच परीक्षेच्या पर्यवेक्षकीयवृंदापैकी असली तरीही अशा व्यक्तीविरुद्ध उक्त अधिनियमानुसार कारवाई करण्यात येईल व दोषी व्यक्ती शिक्षेस पात्र होईल.

पुढील सूचना प्रश्नपुस्तिकेच्या अंतिम पृष्ठावर पहा

पर्यवेक्षकांच्या सूचनेविना हे सील उघडू नये

DO4

2

A

कच्च्या कामासाठी जागा / SPACE FOR ROUGH WORK

aglasem.com

A

3

DO4

1. 'ताईने मुलाला निजविले' या वाक्यातील 'निजविले' या क्रियापदास काय म्हणतात ?

- | | |
|-----------------------|-----------------------|
| (अ) प्रायोजक क्रियापद | (ब) शक्यार्थ क्रियापद |
| (क) गौण क्रियापद | (ड) सहाय्यक क्रियापद |

पर्यायी उत्तरे :

- | | |
|-------------------------|-----------------------|
| (1) फक्त (अ) बरोबर | (2) (अ) चूक (ब) बरोबर |
| (3) (क) बरोबर (ड) बरोबर | (4) (ड) चूक (क) बरोबर |

2. 'चंद्र' या शब्दाला समानार्थी शब्द कोणता ?

- | | | | |
|-----------|----------|-------------|---------|
| (1) इंद्र | (2) निशा | (3) प्रभाकर | (4) शशी |
|-----------|----------|-------------|---------|

3. साधित शब्द कशाला म्हणतात ?

- (1) क्रियापदाला उपसर्ग लागून तयार होणारा शब्द
- (2) मूळ शब्दाच्या मागे पुढे येणारे अक्षर
- (3) मूळ शब्दांना उपसर्ग लागून किंवा प्रत्यय लागून तयार होणारा शब्द
- (4) शब्दाच्या नंतर एक किंवा अनेक अक्षरे जोडून तयार होणारा शब्द

4. 'मन्वंतर' या जोडशब्दाचे पोटशब्द ओळखा.

- | | | | |
|---------------|----------------|----------------|---------------|
| (1) मन + वंतर | (2) मनु + अंतर | (3) मन् + वंतर | (4) मन + अंतर |
|---------------|----------------|----------------|---------------|

कच्च्या कामासाठी जागा / SPACE FOR ROUGH WORK

P.T.O.

DO4

4

A

5. 'द्विविजय' या शब्दातील संधी प्रकार कोणता ?

- (1) स्वरसंधी (2) विसर्गसंधी (3) व्यंजनसंधी (4) विजातीय संधी

6. जेव्हा वाक्यातील क्रियापदाचे रूप कर्त्याच्या किंवा कर्माच्या लिंगवचनाप्रमाणे बदलत नाही व तृतीय पुरुषी एकवचनी असते, तेव्हा त्याला कोणता प्रयोग म्हणतात ?

- (अ) भावे प्रयोग (ब) कर्मणी प्रयोग (क) कर्तरी प्रयोग (ड) मिश्र प्रयोग

पर्यायी उत्तरे :

- (1) (ब) बरोबर (अ) बरोबर (2) (क) बरोबर (ड) चूक
(3) (अ) चूक (ब) बरोबर (4) फक्त (अ) बरोबर

7. 'गाड्यावर नाव आणि नावेवर गाडा' या म्हणीचा अर्थ खाली दिलेल्या अर्थातून शोधा.

- (अ) गरिबाचा श्रीमंत होतो आणि श्रीमंताचा गरीब होतो.
(ब) देवाचा दानव होतो आणि दानवाचा देव होतो.
(क) दोन वस्तुपैकी एकीची जी स्थिती असते तीच दुसरीलाही प्राप्त होते.
(ड) दोन वस्तुचे स्वरूप एक असले तरी स्थिती एकच असते.

पर्यायी उत्तरे :

- (1) (अ) आणि (ब) बरोबर (2) (क) आणि (ड) बरोबर
(3) (अ) फक्त बरोबर (4) (क) फक्त बरोबर

कच्च्या कामासाठी जागा / SPACE FOR ROUGH WORK

A

5

DO4

8. खालीलपैकी कोणता गट अव्ययीभाव समासाचा आहे?

- (अ) वडिलोपार्जित, शास्त्रपंडित, ईश्वरनिर्मित
 (ब) मृगनयना, सिंहकटि, हरिणाक्षी
 (क) शेजारी-पजारी, भिकारी टाकारी, ओळख पाळख
 (ड) यथाशक्ती, आमरण, प्रतिदिन

पर्यायी उत्तरे :

- (1) फक्त (क) बरोबर (2) फक्त (ड) बरोबर
 (3) फक्त (अ) बरोबर (4) फक्त (ब) बरोबर

9. हर्ष, शोक, आश्चर्य, तिरस्कार इ. भावना व्यक्त करण्यासाठी जे अविकारी शब्द वापरतात, त्यांना कोणती अव्यये म्हणतात?

- (1) क्रियाविशेषण अव्यय (2) केवलप्रयोगी अव्यय
 (3) शब्दयोगी अव्यय (4) उभयान्वयी अव्यय

10. 'अगाई' हा शब्द केवलप्रयोगी अव्ययाच्या कोणत्या प्रकारातील आहे?

- (1) तिरस्कारदर्शक (2) शोकदर्शक (3) संबोधनदर्शक (4) आश्चर्यकारक

कच्च्या कामासाठी जागा / SPACE FOR ROUGH WORK

P.T.O.

DO4

6

A

खालील उतारा वाचून त्यावर आधारित प्रश्न क्रमांक 11 ते 15 ची उत्तरे लिहा :

घरे

उंच-उंच कमानींचा वेध घेण्याची क्षमता तुमच्या मनामध्ये आहे याचं तुम्हाला कधीतरी स्मरण झाल आहे का? लाकडांमधून सुंदर शिल्प घडवता येतं, तसच खडकामधून शिल्प घडवता येतं ते तुमच्या अंतःकरणांला पवित्र पर्वत शिखराचा मार्ग दाखवू शकतं अशा सौंदर्याची, अनुभूतीची प्रचिती तुम्ही कधी घेतली आहे काय? तुमच ज्या घरात वास्तव्य आहे त्या घरामध्ये मी विचारतो त्या प्रश्नांची उत्तरं सापडतील का?

तुमच्या घरामध्ये फक्त शारीरिक सुखाचा अनुभव येतो, या शारीरिक सुखांमुळे वासना चाळवल्या जातात, त्या प्रथम तुमच्या पाहुणचारासाठी घरात प्रवेश करतात पण हळूहळू त्या तुमच्यावर सत्ता गाजवतात आणि तुम्ही तर त्या वासनांच्या आहारी जाऊन त्यांचे गुलाम बनता. हे खरं ना?

या वासना अखेरीस पशूंना चाबकाच्या फटकांच्या वठणीवर आणणाऱ्या रिंगमास्टराप्रमाणं तुम्हाला फटकारून नमवतात आणि तुमच्या सर्व इच्छा आकांक्षांचं त्यांच्या हातातील बाहुलं बनवतात. त्या रिंगमास्टरचे हात कदाचित रेशमाप्रमाणं मृदु भासतील पण त्यांच हृदय मात्र लोहाप्रमाणं कठोर आणि निर्दयी असत. तुमच्या बिछान्या शेजारी उभा राहून त्या वासना तुम्हाला झोपवतात आणि तुमच्या शरीराच्या प्रतिष्ठेबद्दल तुम्हाला वाटणाऱ्या अभिमानाची त्या यथेच्छ टिंगल करतात.

तुमच्या इंद्रियांवर तुमचा विश्वास असतो. पण त्या वासना त्यांची टर उडवतात. भुरभुरणाऱ्या म्हातारीच्या केसांची गुंडाळी करावी त्याप्रमाणं त्या इंद्रियांना वासना नाजूक भांड्यात झाकून ठेवतात. अशा वासनांच्या सुखामार्गं तुम्ही धावता तेव्हा तुमच्या आत्म्याचं पावित्र्य आणि शक्ती या नष्ट होतात. तुमच्या उभ्या वासनामय जीवनाकडे छद्मीपणानं हसत त्या तुमच्या मृत्यूनंतर अंत्ययात्रेमध्ये सहभागी होतात.

अखेरीस जिब्रान या समुदायाला उद्देशून बोलताना त्यांचं भवितव्य वेगळं असल्याचं आश्वासन देतो. प्रेमान जिब्रान त्यांचं 'तुम्ही मुलं' असा उल्लेख करतो. तुम्ही शांत असतानाही तुमचं मन अस्वस्थ असत. त्यामुळे तुम्ही वासनांच्या मोहजालामध्ये कधीही फसणार नाही किंवा वासना तुमच्या मनावर कधीही वर्चस्व गाजवू शकणार नाहीत. तुमचं घर हे किनाऱ्यावर नांगर टाकून थांबणाऱ्या बोटीच्या नांगराप्रमाणं कधीही असणार नाही. तुमचं घर जहाजाच्या शिडाप्रमाणं असेल.

तुमच घर जखमेवरील चमकणाऱ्या मलमपट्टीप्रमाण असणार नाही. ते डोळ्यांचं रक्षण करणाऱ्या पापणीप्रमाणं असेल. घरातील दारामधून प्रवेश करताना तुम्ही तुमचे पंख मिटून घ्यायचे नाहीत. छताला तुमचं डोकं थडकेल म्हणून तुम्ही कधीही मान तुकवणार नाही. श्वासोच्छ्वास करताना तुम्ही त्यामुळं भिंतींना तडे पडतील आणि त्या कोसळतील अशा भीतीनं तुम्ही कधीही श्वास घेणार नाही. मृत माणसांनी जिवंत माणसांना राहण्यासाठी बांधलेल्या घरांमध्ये तुम्ही राहायच नाही. तुमचं घर कितीही भव्य, अलिशान असलं तरी त्या घरात गुप्तता पाळली जाणार नाही किंवा तुमच्या तीव्र इच्छा आकांक्षांना ते आसरा देणार नाही.

कच्च्या कामासाठी जागा / SPACE FOR ROUGH WORK

A

7

DO4

11. सौंदर्याची प्रचिती केव्हा येऊ शकते ?

(अ) लाकूड आणि खडक यांची तोडफोड करता येत नाही तेव्हा.

(ब) लाकूड आणि खडक यातून शिल्प घडवता येत नाही तेव्हा.

(क) लाकूड आणि खडक यातून घडलेले शिल्प अंतः करणाला पवित्र पर्वत शिखराचा मार्ग दाखवते तेव्हा.

पर्यायी उत्तरे :

(1) (अ) आणि (ब) बरोबर

(2) (ब) आणि (क) बरोबर

(3) फक्त (क) बरोबर

(4) (अ), (ब) व (क) चूक

12. सदर परिच्छेदातील 'त्यांचं भवितव्य वेगळं' असण्याचं आश्वासन कोणतं ?

(अ) तुमचं घर जहाजाच्या शिडाप्रमाणे असेल.

(ब) वासना तुमच्यावर वर्चस्व गाजवतील.

(क) तुम्ही स्वस्थ असाल.

(ड) वासनांच्या मोहजालात फसाल.

पर्यायी उत्तरे :

(1) (अ) आणि (क) बरोबर

(2) (अ) आणि (ब) चूक

(3) फक्त (क) बरोबर

(4) फक्त (अ) बरोबर

कच्च्या कामासाठी जागा / SPACE FOR ROUGH WORK

P.T.O.

DO4

8

A

13. वासनेला लेखकाने कशाची उपमा दिलेली आहे ?

- (अ) रिंगमास्टर आणि पशू
 (ब) चाबूक आणि बाहुलं
 (क) रिंगमास्टर आणि चाबूक
 (ड) रिंगमास्टर

पर्यायी उत्तरे :

- (1) (अ) आणि (ब) बरोबर (2) फक्त (ड) बरोबर
 (3) (क) आणि (ब) बरोबर (4) फक्त (ब) बरोबर

14. खालील जिवानचे 'घराविषयीचे विचार' कोणाला उद्देशून आहेत ?

- (अ) वासनाग्रस्त लोकांना (ब) विद्वान व लहान मुलांना
 (क) समुदायाला (ड) जखमी व आजारी असलेल्यांना

पर्यायी उत्तरे :

- (1) (अ) आणि (क) बरोबर (2) (ब) आणि (ड) बरोबर
 (3) फक्त (क) बरोबर (4) (क) आणि (ड) चूक

15. आत्म्याचं पावित्र्य आणि शक्ति नष्ट करणारी गोष्ट कोणती ?

- (अ) वासनांना नाजुक भांड्यात झाकून ठेवल्याने
 (ब) इंद्रियांना नाजुक भांड्यात झाकून ठेवल्याने
 (क) वासनांच्या सुखात आनंद न मानल्याने
 (ड) इंद्रियांना वासनांनी नाजुक भांड्यात झाकून ठेवल्याने.

पर्यायी उत्तरे :

- (1) (अ) आणि (ड) बरोबर (2) (अ) आणि (ब) बरोबर
 (3) (ब) आणि (क) बरोबर (4) फक्त (ड) बरोबर

कच्च्या कामासाठी जागा / SPACE FOR ROUGH WORK

A

9

D04

16. The news tickled him to death.

The underlined phrase means :

- (1) greatly amused (2) pained (3) killed (4) frightened
-

17. Locate the grammatically correct sentence/s :

- (I) The unikest feature of this vehicle is its gearbox.
 (II) The most unique feature of this vehicle is its gearbox.
 (III) The unique feature of this vehicle is its gearbox.

Answer Options :

- (1) Only (I) is correct. (2) Only (II) is correct.
 (3) Only (III) is correct. (4) All three are correct.
-

18. The doctor gave him medicine.

In the passive form, the sentence will be :

- (I) He has been given medicine by the doctor.
 (II) Medicine was given to him.
 (III) He was given medicine.
 (IV) Medicine has been given to him by the doctor.

Answer Options :

- (1) Only (I) and (IV) are correct. (2) Only (III) and (IV) are correct.
 (3) Only (II) and (III) are correct. (4) All four are correct.
-

कच्च्या कामासाठी जागा / SPACE FOR ROUGH WORK

P.T.O.

DO4

10

A

19. Which of the following sentences are grammatically correct ?

- (I) The doctor meets his patients between 6.00 p.m. to 9.00 p.m.
- (II) Unless you don't work hard, you will not succeed.
- (III) The teacher advised me to work harder.
- (IV) He has been running his business for 40 years now.

Answer Options :

- (1) Only (I) and (III)
- (2) Only (I), (III) and (IV)
- (3) Only (III) and (IV)
- (4) All four

20. He is one of the tallest boys in class.

The above sentence has been re-written below, changing the degree of the underlined adjective. Choose the grammatically correct option :

- (I) He is taller than all other boys in class.
- (II) He is taller than any other boy in class.
- (III) He is taller than most other boys in class.
- (IV) No one is as tall in class as he is.

Answer Options :

- (1) Only (IV) is correct.
- (2) Only (II) and (III) are correct.
- (3) Only (III) is correct.
- (4) Only (II), (III) and (IV) are correct.

21. Combine the three sentences below to make a Complex-Compound sentence :

You have to keep a sharp eye. He should not cheat you. You have to ensure this.

- (1) You have to keep a sharp eye, and ensure that he doesn't cheat you.
- (2) Keeping a sharp eye will ensure that he does not cheat you.
- (3) If you keep a sharp eye, you can ensure that he doesn't cheat you.
- (4) A sharp eye from you will prevent his cheating you.

कच्च्या कामासाठी जागा / SPACE FOR ROUGH WORK

A

11

D04

22. Fill in the blanks with the correct word pair from the ones given below :

He was walking _____ while the others were quite _____.

- (1) fastly and slowly (2) fast and slow
 (3) fastly and slow (4) fast and slowly

23. Identify the underlined clauses and choose the right answer :

- (I) This is the place where he slipped.
 (II) We know why she is upset.
 (III) This is the movie that I had wanted to see.
 (IV) It is true that he has escaped.

Answer Options :

- (1) Three are noun clauses and one adverb clause.
 (2) Two are noun clauses, one is adjective clause, one is adverb clause.
 (3) Two are adjective clauses, one is noun clause, one is adverb clause.
 (4) Two are adjective clauses, two noun clauses.

24. Fill in the blank with the most appropriate interjection :

_____, I have a brilliant idea.

- (1) Ah (2) Aha (3) Oh (4) Bravo

कच्च्या कामासाठी जागा / SPACE FOR ROUGH WORK

P.T.O.

25. Arrange the segments given below in the right sequence to make the most appropriate and meaningful sentence :

- (I) while listening to music
- (II) it was noticed that
- (III) to solve mathematical problems
- (IV) some of the students found it easy

Answer Options :

- (1) (I), (II), (IV) and (III)
- (2) (II), (I), (III) and (IV)
- (3) (IV), (III), (I) and (II)
- (4) (II), (IV), (III) and (I)

Direction : Read the following passage and answer the questions 26 to 30 that follow :

My own faith in Chaitanya started giving me abundant strength. I no longer wanted to hide myself from the glaring eyes of the world. I took him around with me. He went with us everywhere like any normal child. We were not sorry or uncomfortable carrying him around.

If I required help for him in public places, I was not embarrassed to seek it from people around. I did not mind telling them that he was a special child. I was no more scared of people's looks and awkward questions. I could talk about Chaitanya's problem, calmly. As my mind opened up further, I could discern a new hope springing in my heart. I felt happy I was a Special Mother.

The special school did Chaitanya a lot of good. He was now a much more confident person, adored by his teachers, his friends and school staff. His speech improved and expression became clearer. His social manners became laudable.

Academically, he was still lagging behind the expected standard of learning but it was okay. He started developing an all-round interest in craft, art, music, dancing and sports.

Early in 1997-98, when he returned from state-level inter-school sports, he had two prizes to his credit and a silver medal. He had won his laurels in athletic events and the silver medal in a running race.

When I saw the prizes and read the citation Chaitanya had received, I was stupefied, in total disbelief, then - hugged him, kissed him and cried unabashedly to my heart's content. That day, I cried the first time out of joy and a sense of being vindicated. Without practice he had competed with approximately 1800 children drawn from various schools all over the state. He was subsequently selected for the marathon race, but he could not participate due to a health problem. "Maybe next year he would", I assured myself. And I, as his proud mother, would proudly chronicle his future achievements and success to inspire other mothers of the world.

कच्च्या कामासाठी जागा / SPACE FOR ROUGH WORK

A

13

DO4

26. Fill in the blank with the best among the given options :

To begin with, Chaitanya's parents _____.

- (1) were proud of him (2) hated him
(3) were unconcerned about him (4) were embarrassed about him
-

27. Fill in the blank with the best among the given options :

As Chaitanya grew older, he showed a special talent for _____.

- (1) studies (2) craft (3) music and dancing (4) sports
-

28. Fill in the blank with the best among the given options :

Chaitanya was certainly _____.

- (1) an indisciplined child (2) a sports genius
(3) a handicapped child (4) a spoiled child
-

29. Fill in the blank with the best among the given options :

The mother's hope is _____.

- (1) to feel proud about her son
(2) to become an inspiration for other mothers
(3) to chronicle her son's achievements
(4) to ensure that Chaitanya participated in next year's event
-

कच्च्या कामासाठी जागा / SPACE FOR ROUGH WORK

P.T.O.

DO4

14

A

30. Fill in the blank with the best among the given options :

When Chaitanya did well in the athletic event, his mother _____.

- (1) was surprised
 - (2) did not believe he had really done so well
 - (3) was expecting it
 - (4) was heart-broken
-

31. Consider the following two statements :

- (a) As per the Stockholm International Peace Research Institute, India is the largest arms importer in the world.
- (b) More than three fourth of the arms imported in India come from the U.S.A.

Now tell which of the following options is correct ?

- (1) Statement (a) alone is correct
 - (2) Statement (b) alone is correct
 - (3) Both the statements (a) and (b) are correct
 - (4) Neither statement (a) nor (b) is correct
-

कच्चा कामासाठी जागा / SPACE FOR ROUGH WORK

A

15

DO4

32. Match the pairs : (Bharat Ratna Award)

A	B
(a) Pandit Jawaharlal Nehru	(i) 1991
(b) Dr. Rajendra Prasad	(ii) 1966
(c) Lal Bahadur Shastri	(iii) 1962
(d) Sardar Vallabh Bhai Patel	(iv) 1955

Codes :

	(a)	(b)	(c)	(d)
(1)	(i)	(ii)	(iii)	(iv)
(2)	(ii)	(i)	(iv)	(iii)
(3)	(iv)	(iii)	(ii)	(i)
(4)	(iv)	(ii)	(iii)	(i)

33. Which two states became the first to issue Elector's Plastic Photo Identity Cards (EPPIC) for elections in India 2014 ?

- | | |
|------------------------|-------------------------------------|
| (1) Assam and Nagaland | (2) Meghalaya and Arunachal Pradesh |
| (3) Manipur and Sikkim | (4) Mizoram and Manipur |

34. Arrange the following Army ranks in the appropriate ascending order.

Select the correct option :

- | | |
|-------------------------------|-------------------------------|
| (1) Major, Brigadier, Colonel | (2) Colonel, Major, Brigadier |
| (3) Major, Colonel, Brigadier | (4) Brigadier, Major, Colonel |

कच्च्या कामासाठी जागा / SPACE FOR ROUGH WORK

P.T.O.

DO4

16

A

35. Consider the following statements with reference to the 13th Finance Commission :

- (a) The Commission was established in the year 2007.
- (b) Dr. Vijay Kelkar was the Chairman of this Commission.
- (c) The period of recommendations of the Commission was from April 2007 to March 2012.

Which of the statements given above is/are **not** true ?

- (1) Only (a) (2) (a) and (b) (3) Only (b) (4) Only (c)
-

36. Noted English author and journalist Khushwant Singh died in New Delhi in March 2014. The name of his weekly column was :

- (1) Round and about (2) With malice towards one and all
(3) Between the lines (4) Jugular vein
-

37. The first Asian Games were held in 1951, in New Delhi and were organised at the initiative of the late Prime Minister Pt. Jawaharlal Nehru.

Which of the following statements is **incorrect** about the Asian Games :

- (1) They are held once in four years
(2) Fastest onwards is the motto of the Asian Games
(3) The Emblem is a bright full rising sun with interlocking rings
(4) None of the above
-

कच्च्या कामासाठी जागा / SPACE FOR ROUGH WORK

A

17

DO4

38. Consider the following two statements about the ICC World Cup T20 !

- (a) Five teams (India, Pakistan, England, West Indies and Shri Lanka) have so far won the World ICC T20 Cup !
- (b) Only West Indies have won it twice !

Now state whether,

- (1) Only statement (a) is right.
- (2) Only statement (b) is right.
- (3) Both the statements (a) and (b) are right.
- (4) Neither statement (a) nor (b) is right.

39. Which of the statements given below regarding the prestigious Padma Awards for 2014 is **incorrect** ?

- (a) Dr. Raghunath Mashelkar got it for Science and Engineering.
- (b) Shri. B.K.S. Iyengar for others Yoga.
- (c) Begum Parveen Sultana for Art - Classical singing.
- (d) Prof. Jyesthraj Joshi for Science and Engineering.
- (e) Shri. Kamala Hassan for Art - Cinema.
- (f) Shri. Pallela Gopichand for Sports - Badminton.
- (g) Leander Paes for Sports - Tennis.

Answer Options :

- (1) (b) (2) (d) (3) (f) (4) None

40. The member countries of BIMSTEC are _____.

- (a) India (b) Thailand (c) Shri Lanka (d) Malaysia

Answer Options :

- (1) Only (a), (b) and (d) (2) Only (a), (c) and (d)
- (3) Only (b), (c) and (d) (4) Only (a), (b) and (c)

कच्चा कामासाठी जागा / SPACE FOR ROUGH WORK

P.T.O.

DO4

18

A

41. Consider the following two statements about the General Elections 2014 :

- (a) Indias electorate of 81.5 crore is nearly three times as large as the next largest - US !
- (b) Indias electorate is bigger than the next five - US, Indonesia, Brazil, Russia, Bangladesh put together.

Now state whether,

- (1) Only (a) is correct
 - (2) Only (b) is correct
 - (3) Both (a) and (b) are correct
 - (4) Neither (a) nor (b) is correct
-

42. Which of the following two statements is correct ?

- (a) Madhya Pradesh decided to implement the Food Security Act. from March 1, 2014.
- (b) Under the Food Security Act an estimated 25% population of Madhya Pradesh was expected to be covered.

Answer Options :

- (1) Only (a)
 - (2) Only (b)
 - (3) Both (a) and (b)
 - (4) Neither (a) nor (b)
-

43. Which one of the following statements about Shri. Chandi Prasad Bhat is **incorrect** ?

- (1) He has been awarded the Gandhi Peace Prize for the year 2013.
 - (2) He is an eminent Gandhian and an environmentalist.
 - (3) He received the Padma Vibhushan in 2005.
 - (4) He was awarded the Ramon Magsaysay Award in 1982.
-

कच्च्या कामासाठी जागा / SPACE FOR ROUGH WORK

A

19

DO4

44. In the ICC World Cup T20 finals though we lost to Sri Lanka Virat Kohli played splendidly. Somehow, Yuvraj could not perform well.

In the match,

- (a) Virat Kohli played with a jersey displaying number 12.
 (b) Yuvraj played with a jersey numbered 18.

Which of the above two statements is correct ?

- (1) Only (a) (2) Only (b)
 (3) Both (a) and (b) (4) Neither (a) nor (b)

45. After Fali Nariman, which former Supreme Court judge turned down the offer to head the Lokpal Search Committee ?

- (1) K.T. Thomas (2) Aftab Alam (3) G.S. Singhvi (4) H.L. Gokhale

46. What is true of the Nepal's new Prime Minister ?

- (a) Nepal's parliament has elected Nepali Congress President Sushil Koirala as the new Prime Minister.
 (b) Sushil Koirala was elected with a slender majority.
 (c) Sushil Koirala's party does not have a majority in the parliament.
 (d) So far three Prime Ministers have come from Koirala Family.

Answer Options :

- (1) (a) and (d) only (2) (a), (b) and (c) only
 (3) (a), (c) and (d) only (4) All four (a), (b), (c) and (d)

कच्च्या कामासाठी जागा / SPACE FOR ROUGH WORK

P.T.O.

DO4

20

A

47. Mobile Number Portability which began in 2009 allows subscribers to retain their existing telephone numbers when they switch :

- (a) From one access service provider to another.
- (b) From one technology to another.

Answer Options :

- (1) Only (a) is correct
- (2) Only (b) is correct
- (3) Both (a) and (b) are correct
- (4) Neither (a) nor (b) is correct

48. Which of the following statements about Dr. C.N.R. Rao is/are **not** true ?

- (a) Recently he was awarded with "Bharat Ratna" award.
- (b) He did his college education in Pune.
- (c) He is the Fourth Scientist who received Bharat Ratna award.
- (d) In 1994, he was the Chief of the Scientific advisory Board of the Prime Ministers office of India.

Answer Options :

- (1) (a) and (b)
- (2) Only (b)
- (3) (c) and (d)
- (4) (a), (c) and (d)

49. Which of the two statements given below is/are incorrect about the IIFA Awards 2013 ?

- (a) The film Vicky Donor got it for the Best Film.
- (b) Abhishek Bachchan got it for the Best Actor in Negative Role.

Answer Options :

- (1) Only (a)
- (2) Only (b)
- (3) Both (a) and (b)
- (4) Neither (a) nor (b)

50. Which is the first state, to implement the 'Panchayat Empowerment and Responsibility Scheme' in India ?

- (1) Gujarat
- (2) Karnataka
- (3) Kerala
- (4) None of these

कच्चा कामासाठी जागा / SPACE FOR ROUGH WORK

A

21

DO4

51. Fill in the blank with an appropriate alternative :

18 (160) 22

21 (160) 19

36 (?) 24

(1) 120

(2) 320

(3) 240

(4) 160

52. Select a set for the blank :

☺♣♦♠♥♠♦♣♠♥♠☺♣♦♠♥♠♦♣♠♥♠☺♣♦♠♥♠♦♣♠♥♠

♠♥☺♣♦♠♥♠♦♣♠♥♠☺♣♦♠♥♠♦♣♠♥♠☺♣♦♠♥♠

♣♦♠♥♠♦♣♠♥☺♣♦♠♥♠♦♣♠♥♠☺♣♦♠♥♠

(1) ♦♠♥

(2) ♦♠

(3) ♦♠♥

(4) ☺♣♦

53. Rajat is Peter's son and Sunil's brother. Aripa is Sunil's mother and Jaya's daughter.

Which of the statements given below is **true** ?

(1) Jaya is Rajat's mother-in-law

(2) Aripa is Rajat's mother

(3) Jaya is Peter's Grandmother

(4) None of the above

54. In the two numerical sequences given below, one number that appears in the bottom sequence truly belongs to the upper sequence and vice versa.

Which numbers are they ?

8, 16, 48, 144, 288, 576

8, 24, 48, 96, 288, 864

(1) 16, 24

(2) 144, 96

(3) 576, 864

(4) No exchange is needed

कच्चा कामासाठी जागा / SPACE FOR ROUGH WORK

P.T.O.

DO4

22

A

55. Pointing to a person in photograph a woman said, "Father of this person's brother is the only child of my grandfather".

Which of the following statements will be certainly true about how this woman is related to the person at whom she is pointing ?

- (a) Sister
 (b) Brother
 (c) Sister or brother
 (d) She herself is the person in the photograph.

Answer Options :

- (1) (a) or (d) (2) (b) or (d) (3) (c) or (d) (4) Only (a)
-

56. Lalu has 0.125 more than Balu and Balu has $\frac{3}{4}$ more than Neelu. Between them Neelu, Balu and Lalu have 151. How many Balu has ?

- (1) 63 (2) 56
 (3) 32 (4) Total is not divisible
-

57. Choose an appropriate set for the empty boxes :

E	C	Q
B	A	
G		P
D	B	J

- (1)

		D
B		

 (2)

		B
D		

 (3)

		D
C		

 (4)

		B
E		
-

कच्चा कामासाठी जागा / SPACE FOR ROUGH WORK

A

23

DO4

58. If there are no actors that aren't dancers and no singers that aren't actors then which statement is always **true** ?

- (1) There is not one dancer that is not an actor
 (2) All singers are actors
 (3) Any dancer is also a singer
 (4) None of the above

59. In a certain code ROSU is written as GJFD. How will TIGK be written in the same code ?

- (1) NPRE (2) EPRN (3) REPN (4) EPNR

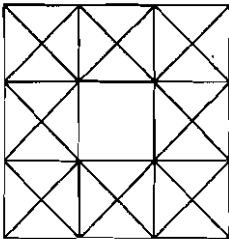
60. The number 14641 is the product of _____.

- (1) 2 prime numbers (2) 3 prime numbers
 (3) 4 prime numbers (4) 5 prime numbers

61. Length of the rectangular area is increased by 10% and its breadth is decreased by 10%. By what percent will there be a change in its original area ?

- (1) 1% increase (2) 1% decrease
 (3) No change (4) Information is insufficient

62. How many squares are there in the figure ?



- (1) 31 (2) 32 (3) 23 (4) 28

कच्च्या कामासाठी जागा / SPACE FOR ROUGH WORK

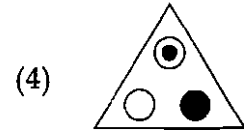
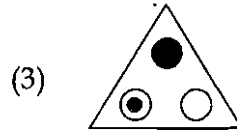
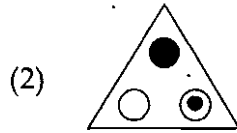
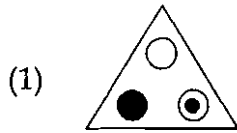
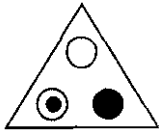
P.T.O.

DO4

24

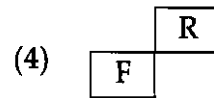
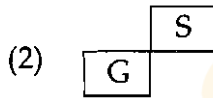
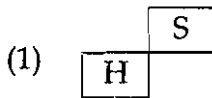
A

63. Find the odd image out :



64. Choose the correct option for the empty boxes.

G	J	O
Z	W	
D		L



65. Removing which of the following squares will have no change in the perimeter of the given figure :

A	B	C	D	E	
	F	G	H	I	J
	K	L			

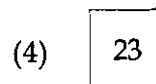
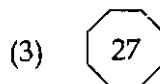
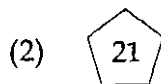
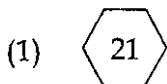

(1) J

(2) A

(3) K

(4) F

66. By exploring the correlation select an alternative for the question mark.



कच्चा कामासाठी जागा / SPACE FOR ROUGH WORK

A

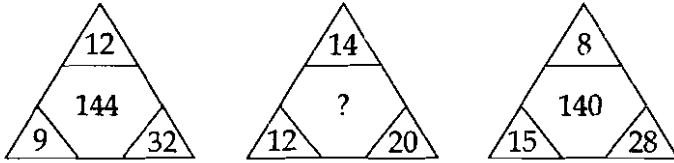
25

DO4

67. How many minutes is it before 12 noon if 1 hour 35 minutes ago it was twice as many minutes past 8 am ?

- (1) 96 (2) 94 (3) 47 (4) 48

68. Replace the question mark with an appropriate alternative :

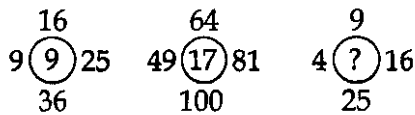


- (1) 130 (2) 140 (3) 100 (4) 120

69. Which of the following venn diagrams represents correctly the relationship between musician, instrumentalist and violinist ?



70. What no. will come at the place of question mark ?



- (1) 6 (2) 7 (3) 8 (4) 9

कच्चा कामासाठी जागा / SPACE FOR ROUGH WORK

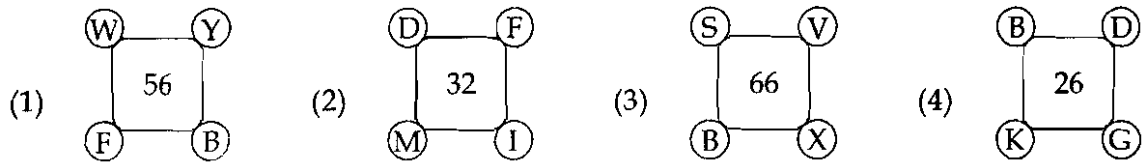
P.T.O.

71. Select an appropriate alternative to the question mark.

$$\frac{5}{8} \div \frac{9}{16} = ?$$

- (1) 0.9^2 (2) $\frac{1000}{99}$ (3) 1.01^2 (4) $\frac{25}{22.5}$

72. Identify the odd figure :



73. Antony, Hari, Sajid and Wanto are friends and are learning different languages. Antony and Hari speak Tamil, where as Sajid speaks Gujarati but not Assamees. Every one except Antony speaks Hindi. Hari and Wanto speak Assamees.

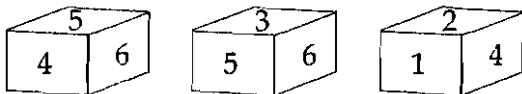
Who speaks Assamees and Hindi only ?

- (1) Antony (2) Hari (3) Sajid (4) Wanto

74. What day comes three days after the day, which comes two days after, which comes immediately after which comes two days after Monday ?

- (1) Monday (2) Friday (3) Thursday (4) Wednesday

75. Which number is on the face opposite to 3 ?



- (1) 1 (2) 2 (3) 4 (4) 3

कच्च्या कामासाठी जागा / SPACE FOR ROUGH WORK

A

27

DO4

76. Which of the following fuels is more environment friendly ?

- (1) LPG (2) CNG (3) Acetylene (4) Gasoline
-

77. Colour of ozone gas is :

- (1) Yellow (2) Dark blue (3) Red (4) Colourless
-

78. Alum is a double sulphate of :

- (1) Al and Cr (2) Al and Na (3) Al and K (4) Al and Mg
-

79. A mixture of 'Blue Vitriol' and 'Milk of Lime' is known as 'Bordeaux' mixture which is used as :

- (1) Insecticide infarming (2) Fungicide for fruit trees
(3) Herbicide in agriculture (4) Fertilizer for garden
-

80. What is the name of Iron Ore $FeO(OH)$?

- (1) Hematite (2) Magnetite (3) Limonite (4) Siderite
-

81. The boiling point of water is unexpectedly high, because :

- (1) Water molecule is not linear
(2) Sp^3 hybridisation is involved in the formation of water
(3) Oxygen is the electropositive element
(4) There is a hydrogen bonding and consequent association of water molecules.
-

कच्च्या कामासाठी जागा / SPACE FOR ROUGH WORK

P.T.O.

82. In winters, surface water of seas near North and South poles solidifies with water beneath it continuing as such. As cold persists :
- (a) Height of the ice slab remains same
 - (b) Height of the ice slab increases
 - (c) Temperature of the water beneath decreases gradually below 4°C
 - (d) Temperature of the water remains at 4°C
 - (e) Temperature of ice and water decreases.

Which of the statements are correct ?

- (1) (b) and (c) (2) (a) and (c) (3) (b) and (d) (4) (a) and (e)
-

83. When an alpha particle is emitted by an atom :

- (1) Its atomic number increases by 2 and mass number decreases by 4.
 - (2) Its atomic and mass numbers decrease by 2.
 - (3) Its atomic number decreases by 2 and mass number decreases by 4.
 - (4) Its atomic and mass numbers decrease by 4.
-

84. The resistance of a conductor depends on which of the following physical conditions of the conductor ?

- (a) Length of the conductor
- (b) Area of cross section of the conductor
- (c) Material of the conductor
- (d) Temperature of the conductor

Which of the statements given above is correct ?

- (1) (a) only (2) (b) only
(3) (a), (b) and (c) (4) (a), (b), (c) and (d)
-

कच्च्या कामासाठी जागा / SPACE FOR ROUGH WORK

85. The power of lens is :

- (1) Directly proportional to its focal length.
 - (2) Inversely proportional to its focal length.
 - (3) Equal to its focal length.
 - (4) None of these.
-

86. Which of the following statements are **true** ?

- (a) Concave mirrors are used in solar devices.
- (b) A convex lens is used to correct hypermetropia.
- (c) Two concave lenses are used in a simple microscope.
- (d) Concave lenses are used in cameras.

Answer Options :

- (1) (a) and (b) (2) (b) and (c) (3) (c) and (d) (4) (a) and (d)
-

87. How are the shock waves generated ?

- (1) When high frequency current flows through a conductor.
 - (2) When source of sound moves faster than that of the sound waves in a medium.
 - (3) When system vibrates with a frequency more than 20 kHz.
 - (4) Both (2) and (3) above.
-

88. At a joint, the bones are connected to each other by :

- (1) Cartilage (2) Fibres (3) Tendon (4) Ligament
-

कच्च्या कामासाठी जागा / SPACE FOR ROUGH WORK

P.T.O.

DO4

30

A

89. Find the perfect scientific reasoning for 'Mirage'.

- (1) Refractive index of hot air is less than that of cool air.
 - (2) Hot air is lighter than the cool air.
 - (3) It is the effect of atmospheric refraction.
 - (4) All of the above.
-

90. The largest and most successful phylum in animal kingdom is :

- (1) Mollusca
 - (2) Annelida
 - (3) Vertebrata
 - (4) Arthropoda
-

91. Human body consists of about _____ different types of muscles.

- (1) 640
 - (2) 460
 - (3) 540
 - (4) 400
-

92. The best quality of pearls is known as :

- (1) Real moti
 - (2) Sweta moti
 - (3) Lingha moti
 - (4) None of the above
-

93. Which of the following primitive men was nicknamed as 'Handy man' ?

- (1) Homo erectus
 - (2) Homo neanderthalensis
 - (3) Homo heidelbergensis
 - (4) Homo habilis
-

94. The system of binomial nomenclature was published in :

- (1) Species Plantarum
 - (2) Genera Plantarum
 - (3) Historia Plantarum
 - (4) Systema Naturae
-

कच्च्या कामासाठी जागा / SPACE FOR ROUGH WORK

A

31

DO4

95. The micronutrient which affects the synthesis of growth hormones in plants is :
- (1) Sulphur (2) Zinc (3) Copper (4) Boron
-
96. Vascular plants have specialized tissues that help to support the plant as well as transport water and nutrients upward from their roots :
- (1) Phloem (2) Sclerenchyma (3) Xylem (4) Parenchyma
-
97. Which one of the following ferns occurs in fresh water ?
- (1) *Pteris* (2) *Lycopodium* (3) *Azolla* (4) *Psilotum*
-
98. Which of the following is **not** a nitrogen fixing bacteria ?
- (1) *Diplococcus* (2) *Azospirillum* (3) *Azotobacter* (4) *Rhizobium*
-
99. Which of the following is the constituent of the enzyme nitrate reductase which is required for nitrogen fixation ?
- (1) Magnesium (2) Manganese (3) Manganese (4) Molybdenum
-
100. Bentham and Hooker's system of classification belongs to which of the types mentioned below ?
- (1) Phylogenetic (2) Natural (3) Artificial (4) Commercial
-

- o o o -

कच्चा कामसाठी जागा / SPACE FOR ROUGH WORK

P.T.O.

सूचना — (पृष्ठ 1 वरून पुढे....)

- (8) प्रश्नपुस्तिकेमध्ये विहित केलेल्या विशिष्ट जागीच कच्चे काम (रफ वर्क) करावे. प्रश्नपुस्तिकेव्यतिरिक्त उत्तरपत्रिकेवर वा इतर कागदावर कच्चे काम केल्यास ते काँपी करण्याच्या उद्देशाने केले आहे, असे मानले जाईल व त्यानुसार उमेदवारावर शासनाने जारी केलेल्या "परीक्षांमध्ये होणाऱ्या गैरप्रकारांना प्रतिबंध करण्याबाबतचे अधिनियम-82" यातील तरतुदीनुसार कारवाई करण्यात येईल व दोषी व्यक्ती कमाल एक वर्षाच्या कारावासाच्या आणि/किंवा रुपये एक हजार रकमेच्या दंडाच्या शिक्षेस पात्र होईल.
- (9) सदर प्रश्नपत्रिकेसाठी आयोगाने विहित केलेली वेळ संपल्यानंतर उमेदवाराला ही प्रश्नपुस्तिका स्वतःबरोबर परीक्षाकक्षाबाहेर घेऊन जाण्यास परवानगी आहे. मात्र परीक्षा कक्षाबाहेर जाण्यापूर्वी उमेदवाराने आपल्या उत्तरपत्रिकेचा भाग-1 समवेक्षकाकडे न विसरता परत करणे आवश्यक आहे.

नमुना प्रश्न

प्रश्न क्र. 201. सतीची चाल नष्ट करण्यासाठी कोणी मूलतः प्रयत्न केले?

- | | |
|---------------------------|-------------------------|
| (1) स्वामी दयानंद सरस्वती | (2) ईश्वरचंद विद्यासागर |
| (3) राजा राममोहन रॉय | (4) गोपाळकृष्ण गोखले |

ह्या प्रश्नाचे योग्य उत्तर "(3) राजा राममोहन रॉय" असे आहे. त्यामुळे या प्रश्नाचे उत्तर "(3)" होईल. यास्तव खालीलप्रमाणे प्र.क्र. 201 समोरील उत्तर-क्रमांक "③" हे वर्तुळ पूर्णपणे छायंकित करून दाखविणे आवश्यक आहे.

प्र. क्र. 201. ① ② ● ④

अशा पद्धतीने प्रस्तुत प्रश्नपुस्तिकेतील प्रत्येक प्रश्नाचा तुमचा उत्तरक्रमांक हा तुम्हाला स्वतंत्ररीत्या पुरविलेल्या उत्तरपत्रिकेवरील त्या त्या प्रश्नक्रमांकासमोरील संबंधित वर्तुळ पूर्णपणे छायंकित करून दाखवावा. ह्याकरिता फक्त काळ्या शाईचे बॉलपेन वापरावे, पेन्सिल वा शाईचे पेन वापरू नये.

कच्च्या कामासाठी जागा /SPACE FOR ROUGH WORK